



1. What does the traffic sign in this picture indicate?

- Give way
- No parking
- **Stop**
- Not a traffic sign



2. What does the traffic sign in this picture indicate?

- **Give way**
- Hospital nearby
- Traffic island ahead
- Indicates cautionary traffic signs



3. What does the traffic sign in this picture indicate?

- **No entry sign**
- One-way sign
- No entry for cars and motorcycles
- Road closed sign



4. What does the traffic sign in this picture indicate?

- No entry sign
- No entry for vehicles in both directions sign
- **One-way traffic sign**
- None of the above is correct



5. What does the traffic sign in this picture indicate?

- **Horn prohibited**
- Compulsory horn
- Horn may be sounded
- None of the above is correct



6. What does the traffic sign in this picture indicate?

- **Bullock cart prohibited**
- Bicycle prohibited
- All vehicles prohibited
- No entry



7. What does the traffic sign in this picture indicate?

- Road users prohibited
- **Pedestrians prohibited**
- Walking zone for all road users
- Pedestrian crossing



8. What does the traffic sign in this picture indicate?

- U-turn prohibited sign
- **Turning right is prohibited**
- Overtaking from the left is prohibited
- Sign to turn right





9. What does the traffic sign in this picture indicate?

- Overtaking from the left is prohibited
- Turn left
- **Turning left is prohibited**
- None of the above is correct



10. What does the traffic sign in this picture indicate?

- Turning right is prohibited
- Sharp right curve prohibited
- **U-turn prohibited sign**
- Sign to turn right



11. What does the traffic sign in this picture indicate?

- Speed limit 2 km per hour
- **No entry for vehicles wider than 2 meters**
- No entry for vehicles taller than 2 meters
- No entry for vehicles with a circumference of more than 2 meters



12. What does the traffic sign in this picture indicate?

- Entry only for vehicles taller than 3.5 meters
- Entry only for vehicles wider than 3.5 meters
- **Entry for vehicles not exceeding 3.5 meters in height**
- Entry only for vehicles less than 3.5 meters wide



13. What does the traffic sign in this picture indicate?

- **Drive at a speed not exceeding 50 km per hour**
- Drive at a speed of 50 km per hour
- Drive at a speed above 50 km per hour
- School zone sign



14. What does the traffic sign in this picture indicate?

- Restriction ends
- Do not stop
- **Do not park**
- No entry



15. What does the traffic sign in this picture indicate?

- **Bus stop**
- Bus way
- Compulsory bus track
- Bus parking



16. What does the traffic sign in this picture indicate?

- Compulsory to drive on the left side
- Road to the left
- **Compulsory left turn**
- Turn left ahead





17. What does the traffic sign in this picture indicate?

- Compulsory one-way
- **Compulsory to go straight only**
- No side roads
- Unidirectional traffic



18. What does the traffic sign in this picture indicate?

- Road to the right ahead
- Compulsory left turn
- **Compulsory to go straight or turn right**
- Curve to the right on the road ahead



19. What does the traffic sign in this picture indicate?

- Compulsory to go straight or turn right
- Curve to the left on the road ahead
- Side road ahead
- **Compulsory to go straight or turn left**



20. What does the traffic sign in this picture indicate?

- Compulsory left turn
- **Compulsory to keep left**
- Turn left
- Reverse road



21. What does the traffic sign in this picture indicate?

- **Horn compulsory**
- Sound horn continuously
- Horn prohibited
- Air horn permitted



22. What does the traffic sign in this picture indicate?

- Road closed
- Do not park
- **Speed restriction ended**
- No entry



23. What does the traffic sign in this picture indicate?

- Entry from the right is prohibited
- Entry from the left is prohibited
- No entry
- **Overtaking is prohibited**



24. What does the traffic sign in this picture indicate?

- No entry
- **One-way traffic**
- No entry for vehicles from both sides
- Entry from the right is prohibited





25. What does the traffic sign in this picture indicate?

- Road to the right ahead
- **Compulsory right turn**
- Turning right is prohibited
- Compulsory to keep to the right



26. What does the traffic sign in this picture indicate?

- Ascent to the right ahead
- Road to the right ahead
- Compulsory right turn
- **Curve to the right ahead**



27. What does the traffic sign in this picture indicate?

- **Curve to the left ahead**
- Ascent to the left ahead
- Keep left
- Turn left ahead



28. What does the traffic sign in this picture indicate?

- **Right hairpin bend**
- Curve to the right ahead
- Descent with right turn ahead
- Right "U" turn



29. What does the traffic sign in this picture indicate?

- Curve to the left ahead
- Left "U" turn
- **Left hairpin bend**
- Descent with left turn ahead



30. What does the traffic sign in this picture indicate?

- Descent with left turn ahead
- **Left reverse bend**
- Left hairpin bend
- Left "U" turn bend



31. What does the traffic sign in this picture indicate?

- **Right reverse bend**
- Right hairpin bend
- Right "U" turn bend
- Turn right and go straight



32. What does the traffic sign in this picture indicate?

- **Steep ascent**
- Steep descent
- Gravel road
- Towing vehicle





33. What does the traffic sign in this picture indicate?

- Steep ascent
- Gravel road
- Slippery road
- **Steep descent**



34. What does the traffic sign in this picture indicate?

- **Narrow road ahead**
- Tunnel entrance
- Roads on both sides ahead
- Narrow bridge ahead



35. What does the traffic sign in this picture indicate?

- Narrow road ahead
- Y-intersection
- **Road widens ahead**
- Roads on both sides ahead



36. What does the traffic sign in this picture indicate?

- Roads on both sides ahead
- **Narrow bridge ahead**
- Narrow road ahead
- Road widens ahead



37. What does the traffic sign in this picture indicate?

- **Slippery road**
- Gravel road
- Towing vehicle
- Rough road



38. What does the traffic sign in this picture indicate?

- Falling rocks
- Slippery road
- Potholes on the road
- **Loose gravel**



39. What does the traffic sign in this picture indicate?

- **Cycle track**
- Bicycle crossing prohibited
- Bicycle crossing
- Motorcycle track



40. What does the traffic sign in this picture indicate?

- Footpath
- Pedestrians may enter
- Pedestrians prohibited
- **Pedestrian crossing**





41. What does the traffic sign in this picture indicate?

- Cattle prohibited
- **Possibility of cattle on the road**
- Vehicles carrying cattle prohibited
- Vehicles carrying cattle allowed



42. What does the traffic sign in this picture indicate?

- **School ahead**
- Pedestrians crossing
- Footpath with school children
- Pedestrian crossing for school children



43. What does the traffic sign in this picture indicate?

- Bridge ahead
- **Ferry**
- Airport ahead
- Seaport ahead



44. What does the traffic sign in this picture indicate?

- Hilly area
- Ghat road
- **Falling rocks**
- Quarry/mining area



45. What does the traffic sign in this picture indicate?

- Cattle prohibited
- **Possibility of cattle on the road**
- Vehicles carrying cattle prohibited
- Vehicles carrying cattle allowed



46. What does the traffic sign in this picture indicate?

- **School ahead**
- Pedestrians crossing
- Footpath with school children
- Pedestrian crossing for school children



47. What does the traffic sign in this picture indicate?

- Bridge ahead
- **Ferry**
- Airport ahead
- Seaport ahead



48. What does the traffic sign in this picture indicate?

- Hilly area
- Ghat road
- **Falling rocks**
- Quarry/mining area





49. What does the traffic sign in this picture indicate?

- Narrow road ahead
- Hump or rough road
- Tunnel
- **Dangerous dip**



50. What does the traffic sign in this picture indicate?

- Dangerous dip
- Zigzag road
- Ghat road
- **Hump or rough road**



51. What does the traffic sign in this picture indicate?

- **Barrier ahead**
- Railway cross ahead
- Suspension bridge ahead
- Ferry



52. What does the traffic sign in this picture indicate?

- Drainage in the middle
- Bridge ahead
- **Gap in median**
- Suspension bridge



53. What does the traffic sign in this picture indicate?

- Do not park
- **Cross road**
- Road ends
- No entry



54. What does the traffic sign in this picture indicate?

- Turn to the left side
- **Junction with a road on the left side**
- T-road
- Compulsory to go straight or turn left



55. What does the traffic sign in this picture indicate?

- Turn right
- Turn right or go straight
- T-road
- **Junction with a road on the right side**



56. What does the traffic sign in this picture indicate?

- **Y-intersection left**
- Junction with a road on the left side
- Ascent to the left side ahead
- Compulsory to go straight or turn left





57. What does the traffic sign in this picture indicate?

- Junction with a road on the right side
- **Y-intersection right**
- Ascent to the right side ahead
- Compulsory to go straight or turn right



58. What does the traffic sign in this picture indicate?

- Ascent to the right and left ahead
- Compulsory to go right or left
- **Y-intersection**
- Curves to the right and left ahead



59. What does the traffic sign in this picture indicate?

- Right and left road splits
- **Staggered junction ahead**
- T-intersection
- Junction ahead



60. What does the traffic sign in this picture indicate?

- Junction
- Roads from three sides join
- **Roundabout**
- Road restricted



61. What does the traffic sign in this picture indicate?

- **Men at work on the road**
- Children playing
- Pedestrian crossing
- Mud on the road



62. What does the traffic sign in this picture indicate?

- Unmanned level cross
- **Manned level cross**
- Barrier ahead
- Road closed



63. What does the traffic sign in this picture indicate?

- Railway station nearby
- **Unmanned level cross**
- Manned level crossing
- Train approaching



64. What does the traffic sign in this picture indicate?

- Load limit
- Prescribed speed limit
- **Axle weight limit**
- Height limit





65. What does the traffic sign in this picture indicate?

- First aid
- Resting place
- **Hospital**
- Clinic



66. What does the traffic sign in this picture indicate?

- **First aid**
- Resting place
- Hospital
- Clinic



67. What does the traffic sign in this picture indicate?

- Hospital
- **Resting place**
- First aid post
- Clinic



68. What does the traffic sign in this picture indicate?

- **No side road ahead**
- Left turn
- Bridge ahead
- Service road on the left



69. What does the traffic sign in this picture indicate?

- Service road ahead
- Main road ahead
- **No side road ahead**
- Bridge ahead



70. What does the traffic sign in this picture indicate?

- Petrol pump on both sides
- **Parking on both sides**
- Police aid post
- Service road on both sides



71. What does the traffic sign in this picture indicate?

- **Parking for scooters and motorcycles**
- Scooters and motorcycles prohibited
- Repairing scooters and motorcycles
- Fine for parking scooters



72. What does the traffic sign in this picture indicate?

- No entry for private vehicles
- **Parking place Taxi/Taxi stand**
- Parking for police vehicles
- No entry for taxis





73. What does the traffic sign in this picture indicate?

- Petrol pump
- Parking place cycle rickshaws
- Autorickshaw parking prohibited
- **Parking place autorickshaws**



70. What does the traffic sign in this picture indicate?

- Police aid post on the right
- **Compulsory right turn**
- Parking allowed on the right
- Petrol pump on the right



71. Which light comes after the amber light at a traffic signal?

- Red
- Green
- Green arrow light
- **Red or Green**

72. What should you do when a vehicle approaches with a flashing red or blue light?

- **Slow down and move the vehicle to the left side of the road**
- Stop where you are
- Ignore the vehicle
- Drive as fast as possible

73. When can you safely open the right-side doors of the vehicle?

- **If there is no other traffic**
- Immediately after stopping the vehicle
- After other cars have signalled to the side
- If you can open and close it quickly

74. What should you do when you see a flashing amber traffic light at a junction?

- Cross quickly
- Stop at the stop line
- **Proceed through the junction with caution**
- None of the above

75. What should you do when entering a roundabout?

- Enter the roundabout at low speed
- **Give priority to vehicles coming from the correct direction**
- Use only the outer lane
- Use only the inner lane

76. What should you do when you reach a junction on a main road with no traffic lights, policemen, or traffic signals?

- Stop the vehicle, get out, check that there are no vehicles on other roads, and then proceed
- Stop the vehicle and proceed with caution
- If the way is clear, proceed at speed
- **Slow down and proceed with caution**



77. What does the traffic sign in this picture indicate?

- Requests vehicles coming from the front to stop and let vehicles from the left pass
- Requests vehicles from the front to stop and let vehicles from behind pass
- **Requests vehicles from the front and back to stop**
- Requests vehicles from the front and back to pass



78. What does the traffic sign in this picture indicate?

- **Requests vehicles coming from the front to stop**
- Requests vehicles coming from the back to stop
- Requests vehicles from the front to pass
- Requests vehicles coming from the back to stop



79. What does the traffic sign in this picture indicate?

- **Requests vehicles coming from the back to stop**
- Requests vehicles coming from the back to pass
- Requests vehicles from the front to stop
- Requests vehicles from the left to pass



78. What does the traffic sign in this picture indicate?

- Requests vehicles from the left to stop
- Requests vehicles coming from behind to pass
- Requests vehicles from the right to stop
- **Requests vehicles from one side to pass**



78. What does the traffic sign in this picture indicate?

- Requests vehicle to stop at the rear
- Requests vehicles from the right and left to pass
- **Requests vehicles from the right and left to stop**
- Requests vehicles from the front and back to pass



78. What does the traffic sign in this picture indicate?

- Requests vehicles from the left to stop
- **Requests vehicles to start at the T-point**
- Requests vehicles from the right to stop
- Requests vehicles from the left to stop and vehicles from the front to pass



79. What does the traffic sign in this picture indicate?

- Requests vehicles from the right and left to stop
- Requests vehicle to stop at the front and back
- **Change of sign**
- Requests vehicles from the right and left to pass



80. What does the traffic sign in this picture indicate?

- **Requests vehicles from the left to start**
- Requests vehicles from the right to start
- **Requests vehicles from the left to pass and vehicles from the front to stop**
- Requests vehicles from the right and left to pass



Right answer



mark on





81. Over speeding or dangerous driving is.....

- A stern warning to authorities
- **A crime and is punishable**
- Attractive to other road users
- A way to reach the destination without delay

82. What does clutch riding mean?

- Using the clutch frequently
- **Driving with your foot on the clutch pedal**
- Not using the clutch at all
- Always disengaging the clutch

83. What is the safe way to stop a vehicle?

- Press the clutch and then brake
- **Press the brake and then the clutch**
- Press the clutch and brake simultaneously
- All of the above are correct

84. The safest way to drive down a steep descent

- **High torque gear with brakes**
- Use top gear with brakes
- Use brake and clutch simultaneously
- Use high torque gear along with brake and clutch

85. If your vehicle breaks down at night

- Stop, apply handbrake, turn on park lights
- Stop and turn on the red light
- Stop, apply handbrake, turn on brake light
- **Stop and display the hazard warning light**

86. When a cow is standing across the road...

Wait until it moves from the road

Pass in front of the cow

Pass behind the cow

Pass on the left side

Pass on the right side

87. Painting a private motor car with olive green paint is.....

- **Not allowed**
- Allowed
- Requires special permission
- Allowed only for motorcycles

88. When turning right or left, which is safer?

- Use indicators only
- Show hand signal only
- **Use both electronic indicators and hand signal**
- Hand signals are only required for left-hand steering vehicles



89. When a driver is driving on a one-way road.....

- Can drive only in the direction permitted by the sign board
- Can drive in the opposite direction in emergency situations
- Can drive in both directions on Sundays
- Is not allowed to drive on a one-way street

90. What should a driver do when visibility is very low during the day in rainy season?

- Stop the vehicle
- Ensure wiper blades are not old
- Use the washer to clear the windscreen
- Reduce the vehicle's speed and use the headlights

91. On a road with two-way traffic, if not directed by a uniformed police officer or appropriate road signs, a driver should drive their vehicle on the side

- Left
- Right
- Middle
- Diagonal

92. What does the hand signal in this picture indicate?

- Intends to turn left
- Intends to turn right
- Intends to slow down the vehicle
- Requests all other vehicles to stop



93. What does the hand signal in this picture indicate?

- Intends to turn right
- Requests oncoming vehicles to stop
- Intends to slow down
- Intends to turn left



94. What does the hand signal in this picture indicate?

- Intends to go straight
- Intends to slow down the vehicle
- Intends to turn right
- Intends to stop the vehicle



95. What does the hand signal in this picture indicate?

- Request for the following vehicle to stop
- Intends to turn right
- Intends to go straight
- Intends to stop the vehicle



96. What does the sign on the instrument console indicate?

- Warning lamp
- Road sign
- Hazard lamp
- Engine brake





97. What does a continuous yellow line in the middle of the road mean?

- Overtake with caution
- **Overtaking is prohibited**
- Stop with caution
- Not a parking zone

98. What should you do if you encounter an obstruction on your side of the road?

- You can use the opposite lane without giving priority to oncoming traffic
- Accelerate to move quickly
- **Give priority to oncoming traffic**
- Stop the vehicle

99. A white line drawn on the side of the road means?

- Means no parking
- Means no overtaking
- **Edge of the carriageway**
- Do not stop

100. When approaching a road under repair, you must observe the permitted speed limit.....

- During daytime and working hours
- Only at night
- During working hours
- **At all times**

101. When a motorcycle rider sees a "Restrictions End" signboard, how fast can he travel afterwards?

- More than 50 km per hour
- The maximum speed of the vehicle
- Not exceeding 50 km per hour
- **Depends on the speed limit of the specified road**

102. If a pedestrian steps onto the zebra line in front of you to cross the road.....?

- **Stop before the stop line and treat it as a stop signal**
- You must stop the vehicle at the zebra line and let them cross
- If you are in an emergency, honk and increase the speed of the vehicle
- If it is a red signal, stop the vehicle for crossing, otherwise it is not necessary

103. When can a free turn be taken at a junction, if permitted by law?

- When traveling straight
- **When turning left**
- When turning right
- All of the above

104. What does the intermittent white line in the middle of the road, as shown in the picture, mean?

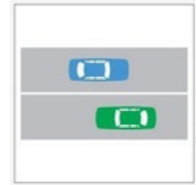
- There is no restriction on crossing the lines
- You can cross the line when it is safe to do so; you must return to your lane after overtaking
- You can enter or leave the road
- **All of the above**





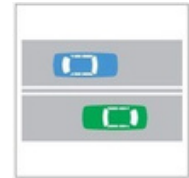
105. What does the continuous white line in the middle of the road, as shown in the picture, mean?

- There are no restrictions on crossing the lines
- **You cannot cross the lines under any circumstances**
- In emergencies, you can cross the lines and drive fast
- You can cross the line when it is safe, and must return to your lane after overtaking



106. What do the two continuous white lines in the middle of the road, as shown in the picture, mean?

- You cannot cross the lines under any circumstances
- They act as a median between the two lanes
- These lines are double dividing lines
- **All of the above**



107. What does the continuous yellow line in the middle of the road, as shown in the picture, mean?

- No restriction on crossing the line
- Stop line
- **You cannot cross the line under any circumstances**
- When it is safe, you can cross the line and must return to your lane after overtaking



108. What does "edge line," as shown in the picture, mean?

- The edge line marked on the side of the road
- Edge lines are continuous white or yellow lines
- Helps you see which lane you are in
- **All of the above**



109. What do "rumble strips," as shown in the picture, mean?

- Rumble strips are raised surfaces marked across the road
- Rumble strips can be placed on edge lines or dividing line
- When you drive over rumble strips, they make a rumbling sound and your vehicle vibrates to warn you
- **All of the above**



110. What does the continuous yellow line on the edge of the road, as shown in the picture, mean?

- **Curblines indicate stopping restrictions**
- You can park vehicles there
- You can stop vehicles there
- **All of the above**



111. What does the traffic island or median strip marked in the middle of the road, as shown in the picture, mean?

- A traffic island is a raised area of the road marked to direct traffic
- A median strip is the part that separates vehicles traveling in opposite directions
- You should not stop or park on a median strip unless a board says it is a parking area
- **All of the above**





112. What do the white or yellow zigzag lines on the side of the road, as shown in the picture, mean?

- Indicates to drivers that stopping or parking in the area with these lines is prohibited for smooth traffic flow
- These lines are commonly found near pedestrian crossings and outside important buildings such as schools, police stations, and hospitals
- These lines were introduced to prevent accidents and for a safe road culture

All of the above

113. What should you do if the vehicle in front of you stops on a zigzag line?

- You should reverse your vehicle
- You can overtake if no vehicle is coming from the opposite direction
- Wait until the vehicle in front of you moves, as pedestrians may be crossing
- You can overtake by honking or giving a signal

114. What does the yellow box junction marked on the road, as shown in the picture, mean?

- You can enter a yellow box junction if the exit ahead is clear
 - Before entering a yellow box junction, ensure that your vehicle has space to cross the junction without stopping in the box
 - Stopping in a yellow box junction is a punishable offence
- All of the above

115. What type of traffic is shown in the picture?

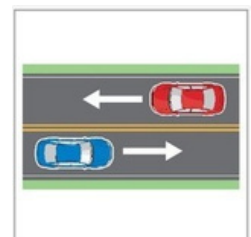
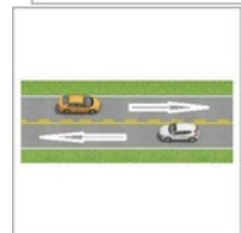
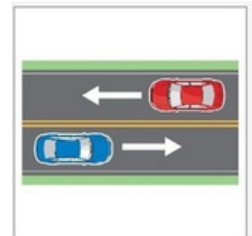
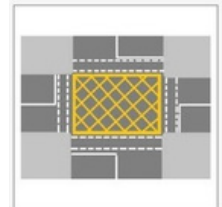
- Single lane traffic
- Double lane traffic
- One-way traffic
- Two-way traffic

116. Vehicles next to the continuous yellow line, as shown in the picture....

- Cannot cross the intermittent yellow line
- Cannot cross the continuous yellow line; overtaking is prohibited
- Can cross in case of emergency
- Can stop in case of emergency

117. If you want to make a "U" turn on this road in the picture, what should you do?


- Proceed forward as turning is prohibited
- Look in the mirror, signal, and turn
- Show a signal for the oncoming vehicle to pass and then turn
- If you have an emergency and no vehicle is coming from the opposite direction, you can proceed






118. If you want to change from one lane to another, what should you do?

- Check for a safe space through the rearview mirror and change lanes if it is safe
- Before you intend to change lanes, check the blind spot and give the correct turn signal
- Check twice for a safe space and change lanes gradually with the correct signal
- **All of the above**



119. Which vehicle shown in the picture can cross the road?

- Both cars can cross the road with caution
- The maroon car on the side of the continuous yellow line can pass with caution
- **The white car on the side of the broken yellow line can pass with caution**
- Both cars cannot cross the road due to the yellow line



120. What do the intermittent double white lines across the road mean?


Entering the main road, give priority to vehicles coming from the right

Entering the main road, you can turn left or right

Proceed after stopping

Do not cross the lines

Do



121. What does this directional arrow between the broken lines indicate?

- Turn left and move forward
- **Warns the driver to return to the lane if overtaking**
- Area where overtaking is permitted
- Left road lane
-
-



122. What should you do when you reach a junction with limited visibility?

- **Look both ways and move slowly**
- Look to the right and move slowly
- Move quickly
- Move slowly

123. You are driving at night on a well-lit road. You must.....

- Use your headlights on high beam
- **Always use your headlights on low beam**
- Always use the hazard lights
- Always use the fog lamps

124. What should your vehicle's lights be like when traveling on the road behind other vehicles at night?

- Hazard warning lights
- **Low beam headlights**
- High beam headlights
- Use flashlights

•



125. What should you do when you are about to enter a bridge?

- **Slow down, do not overtake**
- Watch out for pedestrians
- Turn on headlights
- Move the vehicle as fast as possible to cross the bridge quickly

126. Why should you keep to the left on a two-lane road when approaching a right-hand curve?

- **To improve your view of the road**
- To avoid skidding
- To let vehicles from behind pass
- To give space for other vehicles to overtake

127. When driving on a main road, another vehicle reverses onto the road from a side road. What should you do?

- Move to the opposite side of the road
- **Sound your horn and be prepared to stop**
- Turn on the headlights
- Speed up and drive fast

128. When approaching a crossroad, the driver of a long vehicle in front of you signals right and moves to the left. What should you do?

- Honk to warn the driver
- **Wait behind the vehicle**
- Overtake on the right
- You must stop the vehicle

129. What should you consider before making a "U" turn?

- Use indicator and select neutral gear
- **Turn on the signal for turning right, look in the rearview mirror and turn slowly**
- Wait for the signal to turn red
- Shift down and turn right

130. If you intend to turn left, where should your vehicle be positioned?

- In the middle of the road
- **At the stop line**
- On the shoulder line of the road
- In the leftmost lane

131. When should you not reverse your vehicle?

- On a busy road
- On a one-way road
- From a side road onto a main road
- **All of the above**

132. What should you do when approaching vehicles stopped in two lanes at a signal from behind?

- Pass the entire line of vehicles and stop in front
- **Stop behind the last vehicle in the appropriate lane**
- Stop wherever you find space
- You should follow other drivers



133. What should you do if you start to feel tired or unable to concentrate while driving?

- Stop the vehicle as soon as it is safe and take a rest
- Turn on the stereo to help you concentrate
- Speed up to reach your destination faster
- Make a phone call and try to concentrate

134. What should you do if you feel sick and unable to concentrate while driving a car?

- Turn on the stereo to help you concentrate
- Continue your journey, keep the windows open
- Stop in a safe place, seek medical help if possible
- Speed up to reach the destination as soon as possible

135. When stopping on an upward gradient, one should?

- Stop the vehicle in clutch
- Stop the vehicle on the brake
- Put the vehicle in high gear after stopping, then use the parking brake
- Hold the vehicle in gear

137. Hazard warning lights should only be used...

- to proceed straight at a four-way junction.
- to slow down the vehicle behind.
- to drive the vehicle faster at a busy junction.
- for emergency parking, especially on highways and busy roads.

138. What should you do before opening the right-side doors after parking the vehicle?

- Make sure no vehicle is passing by
- Open the door quickly and get out
- You must open your window glass
- Do not open the right doors, get out through the left side

139. When loading a vehicle, which of the following is most important?

- Load at the back
- Distribute the load evenly everywhere
- Load in the center of the vehicle
- Load at the front

140. You are driving a tipper vehicle carrying dry sand. Why should you cover this load properly?

- To make handling effective
- To adjust your rearward view
- To prevent sand from blowing into the eyes of other pedestrians
- To prevent water from getting in

141. What should be checked first before turning left?

- Right-side rearview mirror
- Left-side rearview mirror
- Look back over your right shoulder
- In the interior mirror

•



142. You are driving a vehicle equipped with a speed governor. What should be noted?

- Over speeding
- Cornering
- Braking
- **Overtaking another vehicle**

143. What is the braking distance a driver of a motor car should maintain when driving behind a long truck?

- **A safe distance**
- 2.5 meters
- About half the length of the truck
- The length of the truck

144. Pedestrians should walk on the side of the road

- **right side**
- left side
- middle
- none of the above

145. Mandatory signs that give orders are mostly found in.....

- **Red/blue circles**
- Red triangles
- Blue rectangles
- Yellow circles

146. Things to check before a long-distance journey

- Fuel, engine oil, brake fluid, coolant level
- Tire condition, spare wheel, necessary tools
- Condition of brakes, tension of all drive belts
- **All of the above**

147. When is reverse driving allowed?

- **The minimum distance required to change direction**
- During night driving
- When driving on ghat roads
- Only on one-way roads

148. What precautions should be taken during night parking?

Park on the service road, use park light and handbrake
Park off the road, use park light and handbrake
Use a fire jack to prevent rolling
Park the vehicle on the footpath away from traffic
Us
Pa

149. You are driving on a four-lane road and the vehicle in front of you is moving slowly in the right lane. If the road ahead is clear, how can you overtake that vehicle?

- You should not overtake
- Pass the vehicle on the left side
- Pass the vehicle on the convenient side
- **Pass the vehicle on the right side after receiving a signal from the vehicle in front**
-



150. When driving on a wet or slippery road.....

- Tire pressure should be reduced
- **Avoid sudden braking and acceleration**
- The vehicle should be driven at high speed
- Avoid straight driving

151. In which of the following situations should a vehicle not be overtaken?

- When the way ahead is not visible
- On curves
- At junctions
- **All of the above**

152. When riding a motorcycle or autorickshaw, hand signals can be shown using.....

- Both hands
- **Right hand only**
- Left hand only
- All of the above

153. When parking a vehicle, you should.....

- Park the vehicle on the carriageway and use the park brake
- Park the vehicle parallel to the curb
- **Park the vehicle in such a way that it does not cause obstruction or inconvenience to other road users**
- Park on the service road using the parking brake

154. Can a vehicle with an expired insurance be driven on a public road?

- The vehicle should be driven with care to avoid any accident or loss to a third party
- **The vehicle should not be driven on a public road**
- Can drive if the driver has a valid personal life insurance policy
- Can drive if all passengers give their consent

155. Before whom does one apply for compensation for a person involved in a vehicle accident?

- RTO
- Police Station
- Driver or owner
- **Motor Accidents Claims Tribunal**

156. How to stop a motorcycle?

- Apply the rear brakes, and after slowing down, apply the front brakes
- **Use front and rear brakes simultaneously**
- Use only the rear brake
- Use only the front brake

157. Driving with worn-out tires is dangerous because.....

- The vehicle accelerates faster
- **It has less road grip**
- High fuel consumption
- High vehicle vibration



158. On ghat roads, when vehicles are coming from opposite directions, the driver going downhill

- Drive fast before the opposing vehicle enters
- Turn on the headlights
- Give priority to vehicles going downhill
- Give priority to vehicles going uphill

159. The Anti-lock Braking System prevents the wheels from locking. This prevents the tires from-.....

- getting punctured
- skidding
- wearing out
- low tire pressure

160. What is the advantage of the rear mirror being slightly convex?

- Provide a wider field of view
- Completely cover the blind spot
- Determine the speed of the following vehicle
- All of the above

161. Fitting multi-tone horns in a motor vehicle is.....

- Allowed for emergency purposes only
- Permitted only for interstate buses
- Allowed for all vehicles
- A punishable offence by law as it causes noise pollution

162. What is the common cause of skidding?

Poor condition of tires and road

Driver's fault

Sudden braking

All of the above

163. What is a blind spot?

- The area not visible in your rearview mirrors
- An area not covered by headlights
- An area inside your vehicle not covered by the rearview mirror
- An area with a high accident rate

164. How does alcohol affect your driving?

- It reduces your attention
- It reduces your concentration and attention
- It increases your confidence
- It reduces your concentration

165. You are driving behind a large vehicle. How can you improve your view?

- Overtake as soon as possible
- Move to the left
- Maintain a greater distance
- Increase your speed



166. What is the benefit of power-assisted steering?

- Reduce tire wear
- Assist in braking
- **Reduce driving effort**
- Increase driving effort

167. In which situation does the weight of passengers shift?

- Braking
- Cornering
- Acceleration
- **All of the above**

168. What does laminated safety windscreen glass mean?

- Does not shatter
- A plastic layer is glued between dual glasses
- Not a plain glass
- **All of the above**

169. What should you do if your vehicle is involved in an accident?

- **Stop at the accident site, provide first aid to the victim if possible, and help get medical assistance**
- Drive the vehicle to the nearest police station
- Inform the insurance authorities as soon as possible
- Do not stop the vehicle if there is a crowd

170. Your vehicle hits a parked vehicle. At that time, the owner of that vehicle could not be found. What should you do?

- Drive the vehicle away from the accident site and repair the damage as soon as possible
- Inform the insurance authorities as soon as possible
- **Inform the police station within the jurisdiction of the accident site within 24 hours**
- Inform the locals

171. The wiper fitted on the vehicle's windscreen is for.....

- wiping water when washing
- **cleaning the windshield in any season**
- as a signal to stop an approaching vehicle
- protecting the screen

172. Which safety device fitted in a light motor vehicle protects the driver from injury?

- Seat position
- **Seat belt**
- Seat tightener
- Headrest

173. If a car drives towards you at night with its high beam on, the driver of that car is

- **driving with bad behaviour as high beams blind others**
- a safe driver as the high beam illuminates the road
- protecting other road users
- none of the above.



174. How should a vehicle be driven when passing a procession, a group of soldiers, or a work site?

- Continue at the usual speed
- Stop the vehicle to complete the work
- **Drive with care and do not exceed a speed of 25 km per hour**
- Proceed after stopping

175. What is the colour of the registration plate of a motor cab?

- Black letters on a white background
- White letters on a yellow background
- Yellow letters on a black background
- **Black letters on a yellow background**

176. What is the colour of the registration plate of a rent-a-cab?

- Black letters on a white background
- White letters on a yellow background
- **Yellow letters on a black background**
- Black letters on a yellow background

177. What is the colour of the registration plate of an electric non-transport vehicle?

- Black letters on a green background
- **White letters on a green background**
- Yellow letters on a green background
- Green letters on a white background

178. What is the colour of the registration number plate of an electric transport vehicle?

- Black letters on a green background
- White letters on a green background
- **Yellow letters on a green background**
- Green letters on a white background

179. When pedestrians are waiting to cross the road near a pedestrian crossing, you should?

- Honk and move forward
- Honk slowly and pass by
- **Stop the vehicle and wait until the pedestrians cross the road, then proceed**
- If the pedestrians are on the right, you can pass by keeping to the left, or vice versa

180. When a vehicle approaches an unmanned railway level crossing, before crossing it, the driver....

- **must stop the vehicle on the left side of the road, get out of the vehicle, go to the railway track, ensure no train or trolley is coming from either side, and then proceed.**
- Honk and cross the track as fast as possible.
- Wait for the train to pass.
- Slow down the vehicle, ensure no train or trolley is coming from either side through the crossing, and then proceed.



181. How can a transport vehicle be identified?

- By looking at the tire size
- According to the colour of the vehicle
- **By looking at the vehicle's number plate**
- MVD vehicles

182. On a road without a footpath, pedestrians

- should walk on the left side of the road.
- **should walk on the right side of the road.**
- can walk on either side of the road.
- are not allowed to walk on the road.

183. To which of the following types of vehicles should right of way be given?

- Police vehicles
- **Ambulance, fire service vehicles**
- MVD vehicles
- Goods vehicles

184. In which of the following situations can a driver of a vehicle overtake?

- When descending a hill
- If the road is wide enough
- **When the driver of the vehicle in front shows a signal**
- If no vehicles are coming from the opposite direction

185. A driver of a motor vehicle should drive

- on the right side of the road
- **on the left side of the road**
- in the middle of the road
- on any side of the road

186. When a vehicle is parked on the roadside at night.....

- The vehicle must be locked
- A person licensed to drive such a vehicle must be in the driving seat
- **The park light must be on**
- All of the above

187. When are fog lamps used?

- Along with low beam headlamps
- When it is foggy
- When there is dust, storm, rain, and snow
- **All of the above**

188. Zebra lines are meant for

- stopping vehicles
- **crossing for pedestrians**
- giving priority to vehicles
- slowing down vehicles



189. When an ambulance approaches

- Allow it to pass if there are no vehicles from the opposite side
- No need to give priority
- **Move the vehicle to the side of the road and allow it to pass freely**
- You can drive the vehicle faster than the ambulance

190. What does a red traffic light indicate?

- The vehicle can proceed with caution
- **Stop the vehicle**
- To slow down
- All of the above

191. Overtaking is prohibited in the following situations

- When it is likely to cause inconvenience or danger to other traffic
- When the vehicle in front speeds up
- When the driver of the vehicle in front shows a signal
- **All of the above**

192. Overtaking when approaching a curve is

- permissible
- **not permissible**
- permissible with caution
- permissible if no vehicles are coming from the opposite direction

193. Drunk driving...

- is allowed in private vehicles.
- is allowed at night.
- **is prohibited in all vehicles.**
- is allowed in transport vehicles.

194. The use of a rearview mirror is for

- seeing the blind spot.
- **monitoring traffic coming from behind.**
- seeing the rear seat passenger.
- none of the above.

195. Getting on and off a moving vehicle...

- is permissible in a bus.
- is permissible in an auto-rickshaw.
- is permissible for a pillion rider sitting side-saddle on a motorcycle.
- **is prohibited in all vehicles.**

196. Parking is allowed

- on turns.
- on the footpath.
- **where parking is not prohibited.**
- none of the above.



197. When refuelling a vehicle.....

- do not check the air pressure.
- **do not smoke.**
- do not use any lights of the vehicle.
- all of the above.

198. Pedestrians should not cross the road at sharp bends or near a stopped vehicle. Why?

- Inconvenience to other vehicles
- Inconvenience to other road users
- **Drivers of other vehicles coming from a distance do not see the people crossing the road**
- Inconvenience to stopped vehicles

199. What should you do when turning into a road on the left side of the road you are on?

- Show the left turn signal, drive to the centre and turn left
- Honk and turn left
- If you are on the left side of the road, you can turn left
- **Show the left turn signal, keep to the left side of the road, and turn left**

200. What is the validity of a PUC certificate?

- Six months
- One year
- **Six months for vehicles with pollution standards BS III and below, and one year for those with BS IV and above**
- One year for vehicles with pollution standards BS III, and six months for those with BS IV and above

201. If you are driving at night with headlights on and a vehicle comes from the opposite direction, what will you do?

- Continue on the left side
- Dim and brighten the headlights several times
- **Dim the headlight until the vehicle passes**
- Always use the bright headlight

202. What is the minimum age to obtain a license for riding a motorcycle without gear?

- **18 years**
- 21 years
- 16 years
- 17 years

203. What should you do when you see a "School" traffic sign while driving?

- Stop the vehicle, honk, and proceed
- **Slow down and proceed with caution**
- Honk continuously and proceed
- All of the above

204. When turning left, the driver of a two-wheeler should

- extend his left hand to the left.
- not show a hand signal.
- **show a signal for left with his right hand.**
- none of the above.



205. What is the signal to be shown when making a “U” turn?

- Signal for turning left
- **Signal for turning right**
- Signal for slowing down
- Slow down while signalling to turn right

206. For how many years is the one-time tax paid for a new car?

- Until the registration of the vehicle is canceled
- Five years
- 10 years
- **15 years**

207. How many people can be carried in the cabin of a goods vehicle?

- Five individuals
- Enough people to load and unload goods
- **As many people as recorded in the registration certificate**
- Individuals are not allowed

208. What should you do when your vehicle is being overtaken?

Stop your vehicle and allow the vehicle to overtake
Do not obstruct the other vehicle from overtaking
Down down your vehicle and move to the right
Increase the speed of your vehicle
Slow
Increase

209. Which of the following is a place where parking is prohibited?

- Entrance of a hospital
- Where parking is prohibited
- On the footpath
- **All of the above**

210. What is the use of the hand brake?

- To reduce speed
- For emergency braking along with the service brake
- **To park a vehicle**
- All of the above

211. More than two people travelling on a two-wheeler is.....

- permitted in unavoidable circumstances
- **a violation of the law**
- permitted when there is less traffic
- all of the above

212. The minimum age to obtain a driving license for transport vehicles is....

- 25 years
- 18 years
- **20 years**
- 21 years



213. In which of the following situations is overtaking prohibited?

- In heavy traffic
- When taking a curve
- On a narrow bridge
- **All of the above**

214. While you are driving, if a person in charge of an animal requests to stop the vehicle as they are unable to control the animal, what should you do?

- **The driver must stop the vehicle**
- The driver should honk and proceed
- The driver should slow down
- If there is space, the driver can proceed

215. Over speeding...

- **is an offences that can lead to suspension or cancellation of the driving license**
- is an offence that leads only to a fine
- is not an offence in case of an emergency
- is not an offence

216. If a vehicle is involved in an accident.....

- it must be reported to the nearest police station immediately
- it must be reported to the nearest police station within 12 hours
- **it must be reported to the nearest police station within 24 hours**
- it must be reported to the nearest police station within 48 hours

217. Smoking while driving a public service vehicle.....

- **will result in suspension of the driving license**
- can only attract a fine
- is not an offence
- smoking is allowed if passengers permit

218. Overloading a goods vehicle.....

- is not legally punishable
- only attracts a fine
- **is legally punishable, including a fine and license suspension**
- None of the above is the correct answer

219. If a taxi driver refuses to go on a trip because the distance is short.....

- **it is legally punishable, including a fine and license suspension**
- only attracts a fine
- is legally correct
- None of the above is the correct answer

220. Where the road is marked with a continuous yellow line, a vehicle.....

- **must not touch or cross the yellow line**
- can overtake only on the right side of the yellow line
- should cross the line only when overtaking the vehicle in front
- None of the above is the correct answer



221. When you are driving on gradient roads, you should....

- give priority to vehicles coming downhill
- **give priority to vehicles going uphill**
- give priority to overloaded vehicles
- give priority to heavy vehicles

222. The driver of a tractor

- **should not carry any person other than the driver**
- more than two persons including the driver
- more than three persons excluding the driver
- None of the above is the correct answer

223. In which situation can you overtake a vehicle from the left?

- When the driver of the vehicle in front has indicated their intention to turn right and has moved to the centre of the road
- If the vehicle to be overtaken is stationary and it is safe to pass that vehicle from the left
- If the vehicle to be overtaken is driving on the right side of a multi-lane road and it is safe to overtake the vehicle in front through the left lane
- **All of the above**

224. In which of the following circumstances can a vehicle be seized by officials?

- **In a situation where the vehicle does not have a valid registration permit**
- The vehicle does not have valid insurance coverage
- When the vehicle exceeds the speed limit
- When the vehicle is carrying excess weight

225. You have a learner's license for a motorcycle, but.....

- you can drive when there is less traffic
- you should only drive when accompanied by an instructor who holds a driving license to ride a motorcycle
- **you should not carry any other person on the motorcycle except for the purpose of receiving instructions from an instructor who holds a valid driving license for a motorcycle**
- None of the above is the correct answer

226. All motor vehicles must be covered by

- Life Insurance
- **Third Party Insurance**
- Comprehensive Insurance
- Full Cover Insurance

227. The number of passengers allowed to be carried in a private vehicle is recorded in the..

- **Registration Certificate**
- Tax Token
- Permit
- Insurance Certificate



228. When is overtaking prohibited?

- When the road is marked with a continuous centre line in white or yellow
- On a narrow bridge
- At junctions, intersections, and pedestrian crossings
- **All of the above**

229. What does a stop line mean?

- A line drawn along the edge of the road in white or yellow
- **A line 5 centimetres wide in white or yellow near a road junction or pedestrian crossing**
- An intermittent white line in the middle of the road
- A line drawn in the middle of the road in yellow

230. Before starting the vehicle's engine

- **check the coolant level and engine oil level**
- check the headlight
- check the brake
- All of the above

231. Which of the following is the only vehicle allowed to be driven at a speed of more than 60 kilometres per hour?

- Motorcycle
- **Motor car**
- Stage carriage
- Tipper lorries

232. What is the maximum permissible distance between towing vehicles?

- Seven meters
- **5 meters**
- 10 meters
- Three meters

233. What is the maximum permissible weight that can be carried in a goods vehicle?

- No limit
- **As permitted by the Registration Certificate/Permit**
- As permitted by the Insurance Certificate
- No limit

234. According to Section 112 of the Motor Vehicles Act, 1988

- **Speed limit should not be exceeded**
- Should not drive after consuming alcohol
- Should not use the vehicle on the road without paying tax
- The gross weight of the vehicle should not be exceeded

235. According to Section 113 of the Motor Vehicles Act, 1988, a driver should not drive a vehicle....

- after consuming alcohol.
- exceeding the speed limit.
- **exceeding the gross vehicle weight.**
- none of the above.



236. What is the height limit of the load of a goods vehicle from the ground level?

- 3.8 meters
- Three meters
- No limit
- **Four meters**

237. According to Section 129 of the Motor Vehicles Act, 1988, a person riding a motorcycle must.....

- wear a jerkin.
- **wear a helmet.**
- wear shoes.
- wear gloves.

238. Zig-zag driving is.....

- dangerous only for two-wheelers.
- **always dangerous for all vehicles.**
- a threat to four-wheeled vehicles.
- safe when the road is slippery.

239. You are on a road with a long downward slope. What should you do to control the speed of your vehicle?

- **Shift to a low gear**
- Stop the engine
- Select neutral
- Apply brakes continuously

240. To supervise a person learning to drive, you must...

- **be an authorised driving trainer.**
- hold a driving license.
- hold a learner's license.
- be an instructor. ⁹⁹⁰

241. It is essential to wear a helmet when riding a two-wheeler because

- **it is for your personal safety.**
- otherwise, you will be caught by the traffic police.
- it is necessary for equality on the road.
- it is safe for all road users.

242. You are overtaking a car at night. What should you be careful about?

- You should not dazzle other road users
- **You should flash your headlamps before overtaking**
- Your rear fog lights are turned on
- Dim your headlight

243. You stop for pedestrians waiting to cross at a zebra crossing. They do not start to cross. What should you do?

- Sound your horn
- **Wait patiently**
- You start to drive
- Ask if they are crossing or not
-



244. It is essential to dip your lights

- near an oncoming vehicle.
- when fog lamps are switched on in foggy weather.
- when driving immediately behind another vehicle.
- **All of the above.**

245. The driver of which vehicle should drive with the headlights on during the day?

- Motor car
- Construction work vehicles
- Hazardous vehicles
- **Motorcycle**

246. While you are driving, a vehicle comes fast behind you flashing its headlights. What should you do?

- Speed up to maintain a gap behind you
- Touch the brakes to show your brake lights
- **If it is safe, allow the vehicle to overtake**
- Stop your vehicle

247. When should you use headlights during the day?

- **In low visibility areas and on highways**
- On country roads
- Through narrow streets
- In an emergency

248. The basic rule of a two-lane road is

- **stay in the left lane if not overtaking**
- maintain the lane with the least traffic
- always stay in the right lane at high speed
- drive in the centre lane

249. Which of the following is a legal requirement for every vehicle?

- **First aid kit**
- Spare wheel
- Audio system
- Seat belt

250. What are the dangerous articles that can be carried in a public service vehicle?

- Explosives
- **Fuel and lubricants for vehicles**
- Safely packed cartridges for small arms
- Gas cylinder

251. Using LPG as fuel in a vehicle

- is prohibited by law
- changing fuel is not allowed
- cannot be used even in the case of modern LPG in-built models
- **can be used after certification from the authorities**



252. Towing is only allowed for..

- **mechanically disabled or incompletely assembled motor vehicles**
- registered vehicles
- unregistered vehicles
- all of the above

253. A motor driving license issued in one state is valid where?

- **Throughout INDIA**
- Throughout the world
- Only in the state of issue
- Throughout India and in countries that have signed a mutual agreement

254. How many licenses can you hold at the same time?

- A maximum of three licenses
- **A single license that can be used to drive multiple types of vehicles**
- You can have any number of licenses, however, each license is only allowed for one class of vehicle
- None of the above

255. Can a motor vehicle be given to a person without a valid license to drive?

- Yes, because the driver is solely responsible
- Yes, if the person is a driving expert
- It is a crime only if the vehicle is involved in an accident
- **No, because the person in charge of the vehicle is also liable and it is a serious offence**
-

256. Can additional headlights be provided in addition to the standard headlights?

- Yes, adding more light makes the road brighter
- Yes, you can add one whenever the vehicle's headlight has low visibility
- No, additional lights are not allowed
- **Can be provided on the underside of the vehicle**

257. Do not attach or hang anything on the rearview mirror...

- **is against the regulation**
- is permissible depending on its size
- is permissible if the object does not obstruct the driver's view
- is permissible if the object does not obstruct other road users

258. When riding together (group riding), the positions for two or more motorcycles driving on the road are?

- Side by side
- **Maintain a staggered line with a proper distance between motorcycles**
- Travel one behind the other in a single line
- All of the above

259. Drivers should not honk...

- on a one-way road
- on the main road
- **in a silent zone**
- all of the above



260. In which colour light should the registration numbers be illuminated?

- Red light
- **White light**
- Blue light
- Amber light

261. Section 131 of the MV Act, 1988 specifies the duties of the driver

- regarding the duty to produce license and registration certificate
- regarding signals and signalling devices
- **regarding precautions at unmanned railway level crossings**
- regarding the driver's duty in case of an accident

267. Are audio-visual devices permissible in any class of vehicle? If so, in which class?

- Yes, in stage carriage buses
- **Yes, in contract carriages except A R**
- Yes, in EIB
- Not permissible for any class of vehicle

268. Driving under the influence of alcohol is punishable if the blood alcohol level exceeds.....

- **30 mg per 100 ml of blood**
- less than 30 mg per 100 ml of blood
- more than 100 per 100 ml of blood
- none of the above

269. If persons sitting or standing next to the driver cause inconvenience in controlling the vehicle it can be allowed with the permission of the RTO

- **Not allowed**
- Allowed in emergency situations
- Not an offence at all ¹⁰⁸⁶
-

270. The colour of the number plate of commercial vehicles?

- **Black letters and numbers on a yellow background**
- Yellow letters on a black background
- Black letters on a white background
- White letters and numbers on a yellow background

271. You can appear for the driving test

- from the day after taking the learner's license
- **after 30 days from the date of taking the learner's license**
- after 60 days from the date of taking the learner's license
- after 90 days from the date of taking the learner's license

272. The colour of the number plate of a private vehicle?

- Yellow letters and numbers on a black background
- Black letters on a yellow background
- White letters and numbers on a black background
- **Black letters on a white background**



273. When you approach a narrow bridge and another vehicle is about to enter the bridge from the opposite side, what should you do?

- Speed up and try your best to cross the bridge
- Turn on the headlight and cross the bridge
- **Wait until the other vehicle crosses the bridge, then proceed**
- None of the above

274. The use of a horn is prohibited

- near a church, temple
- **near hospitals, courts**
- near a police station
- at junctions

275. The documents of a private vehicle are

- Registration Certificate, G.C.R, Insurance Certificate
- **Registration Certificate, Insurance Certificate, Tax Token, PUC Certificate**
- Registration Certificate, Permit, PUC Certificate, Insurance Certificate
- Registration Certificate, G.C.R, Permit, PUC Certificate, Insurance Certificate

276. When school buses stop to pick up or drop off students

- Honk and proceed
- Honk and proceed on the left side
- No special care is needed
- **Proceed slowly and cautiously as students may suddenly cross the road**

277. When a vehicle enters a main road from a minor road, who should be given priority?

- Vehicles coming from the left
- Vehicles coming from the right
- **All vehicles moving on the main road**
- No priority needed

278. What type of horn is allowed in motor vehicles?

- Air horn
- Multi-tone horn
- **Electric horn**
- All of the above

279. You are behind a bus that has stopped to pick up or drop off passengers..

- **Wait patiently behind**
- Overtake from the left
- Overtake away from the pedestrians
- None of the above

280. You can save fuel while driving by

- high speed in high torque gear
- high speed in low torque gear
- low speed in high torque gears
- **a moderate uniform speed of 45-55 km/ph in top gear**



281. What does the exhaust smoke from your vehicle contain?

- Oxygen, Nitrogen, Hydrocarbons
- Carbon dioxide, Nitrogen oxide, Water
- **Carbon monoxide, Nitrogen oxide, Hydrocarbon**
- Carbon dioxide, Nitrogen oxide, Hydrocarbons

282. The gear to be used for high power?

- **First gear**
- Top gear
- Second gear
- None of the above

283. Who should treat a person involved in an accident?

- Only a government hospital doctor
- **Any registered medical practitioner or doctor**
- Nurses in a government hospital
- All of them

284. When parking your vehicle on a downward gradient, in addition to applying the handbrake, the gear should be engaged in.....

- Neutral gear
- First gear
- **Reverse gear**
- Top gear

285. Seat belts should be used by?

- Driver only
- Front seat passengers only
- **All forward-facing passengers**
- All passengers

286. In case of an accident, what number should you dial to seek an emergency ambulance?

- **108**
- 101
- 100
- 102

287. What is the minimum age required to obtain a driving license for an LMV vehicle?

- 16 years
- **18 years**
- 20 years
- 21 years

288. What is the switch shown in the picture used for?

- To increase the brightness of the headlight
- **To adjust the height of the headlight beam**
- To turn the headlight on/off
- To change dim/bright





289. Where are single stop lines used?

- In front of traffic signals and pedestrian crossings
- To indicate a road intersection
- At junctions controlled by road signs
- At the entrance of a roundabout

290. When entering a roundabout, priority is given to?

- No vehicle has priority
- Vehicles already in the roundabout
- Entering vehicles
- Vehicles coming from the right

291. Give way lines are....

- an intermittent single line
- continuous double lines
- a continuous single line
- intermittent double lines

292. The white coloured road studs shown in the picture indicate?

- Traffic lane line and the centre of the carriageway
- A line that should not be crossed
- A crossable edge
- Can indicate the right side of the carriageway where the vehicle is running



293. What is the colour used for signs to impose cross markings, parking restrictions, and other traffic controls?


- Green
- Yellow
- White
- Red

294. What is the colour for road marking used to segregate public transport exclusive to bus lanes?

- Yellow
- Green
- White
- Blue

295. The red coloured road studs in the picture indicate...?

- A line that should not be passed and mainly defines the left edge of the road
- The centre of the carriageway
- To define the end of the carriageway
- A crossable edge line ¹¹⁸⁹



296. The green coloured road studs in the picture indicate.....?

- A line that should not be crossed
- The centre part of the carriageway
- A crossable edge line
- Can define the right side edge of the carriageway





297. The yellow coloured road studs in the picture indicate?

- A line that should not be crossed
- To define the right side edge of the carriageway
- **Both one and two are correct answers**
- None of the above



298. What does this logo, shown in the picture affixed to a vehicle, indicate?

- A vehicle used by a person learning to drive
- **A vehicle used by persons with disabilities**
- It is a special vehicle
- A vehicle with a wheelchair



299. Overtaking when approaching a curve is...

- permissible
- permissible with caution
- **not permissible**
- both one and two are correct

300. In foggy conditions, putting the headlight on high beam is.....

- good as the road can be seen clearly for a short distance ¹
- ensures that others can see you
- **bad because it will reflect back and scatter**
- good as the road far away can be seen clearly

301. To drive on the road, learners must

- possess only the vehicle's registration certificate
- have taken instructions from professional
- **have a valid learner's license**
- apply for a driving test within 12 months

302. If a lane is marked for a specific class of vehicles, what should other vehicles do?

- Can use the lane if there are no vehicles in the lane
- Can drive in that lane only if the sign directs
- **Should not drive in that lane at all**
- Drive for a short distance in that lane

303. What is the validity of a learner's license?

- 3 months
- Until a driving license is obtained
- **6 months**
- 1 year

304. What does PUC mean?

- Pollution Under Control/Cancellation
- **Pollution Under Control Certificate**
- Pollution Under Cancellation Certificate
- Pollution Uncontrolled Certificate



305. What is the minimum age to get a car driving license?

- 20 years
- 15 years
- 16 years
- 18 years

306. You arrive at a motorcycle accident. No other vehicles are involved. The rider is lying unconscious in the middle of the road. What is the first thing you should do?

- Move the rider from the road
- Warn other traffic
- Remove debris from the road
- Reassure the rider

307. Which of the following vehicles has priority?

- Police vehicles
- Buses
- Emergency vehicles
- Two-wheelers

308. More than one person travelling on a two-wheeler is?

- Permissible when traffic is light
- A violation of the law
- Allowed in some places
- Permissible

309. Using unregistered vehicles in public places is

- illegal
- legal
- allowed in some places
- permissible when traffic is light

310. Where is it prohibited to make a "U" turn?

- At a roundabout
- Where prohibited by a road sign or traffic signal
- In a parking lot
- On a residential street

311. What should a driver ensure when turning right?

- They are the first vehicle at the intersection
- To give priority to other users
- Use the horn to inform others
- That there are no passengers

312. If it rains while you are driving on the road, what should you do?

- Speed should be reduced by half
- A greater distance should be maintained from the vehicle
- Sudden braking and acceleration should be avoided
- All of the above should be followed



313. If you see a driving school vehicle on the road

- honk constantly ¹²⁵⁸
- warn by flashing headlights
- **slow down the vehicle and approach with caution**
- speed up and pass quickly

314. What is the primary function of the accelerator in a motor vehicle?

- **To increase the speed of the vehicle**
- To decrease the speed of the vehicle
- To change the direction of the vehicle
- To apply the brakes

315. The function of which of the following is to change the direction of a vehicle?

- Clutch
- **Steering wheel**
- Accelerator
- Brake pedal

316. The clutch in a manual transmission vehicle is used to.....

- start the engine
- **change gears smoothly**
- control the speed of the vehicle
- apply the brakes

317. What is the purpose of the gear lever in a manual transmission vehicle?

- To increase the speed of the vehicle
- To control the brakes
- To change the direction of the vehicle
- **To change the gear of the vehicle**

318. The brake pedal in a vehicle is primarily used to.....

- increase the vehicle's speed
- control the vehicle's direction
- **stop or slow down**
- engage the parking brake

319. What does the term "engine braking" refer to?

- Applying the parking brake
- **Slowing down the vehicle using engine compression by downshifting**
- Using the brake pedal to slow down the vehicle
- Using ABS to prevent wheel lock-up

320. Which of the following components helps vehicles provide smooth power steering?

- Brake fluid
- **Power steering fluid**
- Transmission fluid
- Engine oil



321. Cruise control in a vehicle is mainly used to.....

- control the braking system
- change gears automatically
- **maintain a constant speed without pressing the accelerator**
- steer the vehicle

322. What should you do when parking parallel to the road?

- Align with the vehicle in front of the parking space
- Check mirrors and blind spots
- Give a signal before parking
- **All of the above**

323. What is the correct sequence of operations for the MSM principle?

- Signal, Manoeuvre, Mirror
- Mirror, Speed, Manoeuvre
- **Mirror, Signal, Manoeuvre**
- Signal, Mirror, Manoeuvre

324. As part of the MSM routine, when should you check your mirror?

- Only when changing lanes
- **Before signalling and performing any action**
- After signalling
- After making a turn

325. Which of the following best describes the PSL routine?

- **Position, Speed, Look**
- Position, Signal, Look
- Position, Speed, Manoeuvre
- Position, Speed, Mirror

326. What is the main thing to check before performing an action in the PSL routine?

- Only the speed of your vehicle
- **The road's position, speed, and mirrors**
- Only your blind spots
- The car behind you¹

327. You are approaching a junction to turn left. According to the MSM routine, what should you do?

- Signal left, then check mirrors and turn
- Signal left and turn immediately
- Check mirrors and blind spots after turning
- **Check mirrors, signal left, and then turn**

328. According to the PSL principle, what should your speed be when approaching a hazard?

- Increase speed to clear the hazard quickly
- Maintain a constant speed
- **Adjust your speed based on the situation**
- Immediately slow down to the lowest possible speed



329. According to the PSL routine, why is the 'Look' step important?

- To ensure you are going at the correct speed
- **To ensure no one is in your blind spot or hazardous positions before you act**
- To check if the road is wide enough
- To ensure your mirrors are adjusted

330. When should you use the MSM routine?

- **Every time you plan to turn, overtake, or change direction**
- Only when overtaking
- When driving in residential areas
- Only on the carriageway

331. Which of the following is an important safety device designed to protect children under 12 when traveling in cars?

- Child seat belt
- **Child restraint system**
- Baby on board signage
- Child headrest

332. A motor vehicle built or adapted for a specific requirement of goods or passengers is called a

- Goods vehicle
- Altered vehicle
- Public service vehicle
- **Special purpose vehicle**

333. The application for granting a learner's license should be given in

- Form 1
- **Form 2**
- Form 3
- Form 4

334. Which of the following documents is not considered as proof of address and age for obtaining a learner's license or driving license?

- Aadhaar Card
- Electoral Roll
- Life Insurance Policy
- **Electricity or telephone bills**

335. When can an application for renewal of a driving license be submitted?

- One year before expiry
- Within one year after the expiry date
- **Both of the above are correct**
- None of the above



336. What is the application form for registering a motor vehicle?

- Form 19
- **Form 20**
- Form 21
- Form 22

337. From when are vehicle manufacturers providing High-Security Registration Plates, including the third registration mark, with the vehicle

- From April 1, 2018
- From October 1, 2018
- **From April 1, 2019**
- From October 1, 2019

338. The colour of the top lights fitted on the front of goods vehicles is.....

- **White**
- Yellow
- Blue
- Red

339.-is the form for issuing a Pollution Under Control certificate

- Form 40
- Form 51
- **Form 59**
- Form 59a

340. The validity of the smoke pollution control certificate for vehicles manufactured according to Bharat Stage IV standards is

- Six months
- **One year**
- Eighteen months
- Two years

341. Which is the traffic sign that indicates "Compulsory keep left"?



342. Which is the sign that indicates "Cycle Track"?



343. Which is the traffic sign that indicates "Compulsory sound horn"?





344. Which is the traffic sign that indicates "Overtaking prohibited"?



345. Which traffic sign indicates the "Width Limit"?

346. Which traffic sign indicates "Bus Stop"?



347. Which traffic sign indicates the "Length Limit"?



348. Which of these indicates mandatory traffic signs?



349. Which traffic sign indicates "No entry for handcarts"?



350. Which traffic sign indicates a "Y-intersection"?





351. Which traffic sign indicates a "Curve to the right ahead"?



352. Which traffic sign indicates a "Curve to the left ahead"?




353. Which sign indicates a "Right hairpin bend"?



354. Which traffic sign indicates a "Left hairpin bend"?



355. Which sign indicates "Right reverse bend"?



356. Which traffic sign indicates "Left reverse bend"?





357. Which traffic sign indicates "Steep ascent"?



358. Which traffic sign indicates "Steep descent"?



359. Which of these indicates cautionary traffic signs?



360. Which traffic sign indicates "Gravel roads"?



361. Which traffic sign indicates "Cyclist crossing"?



362. Which traffic sign indicates "Pedestrian crossing"?





363. Which traffic sign indicates "Animals on road"?



364. Which traffic sign indicates "Ferry"?



365. Which traffic sign indicates "Falling rocks"?



366. Which traffic sign indicates "Dip in the road"?



367. Which traffic sign indicates "Hump on the road"?



368. Which traffic sign indicates "Barrier ahead"?



369. Which traffic sign indicates "Gap in median"?





370. Which traffic sign indicates "Men at work"?



371. Which traffic sign indicates "Manned level crossing 200 meters ahead"?



372. Which traffic sign indicates "Unmanned level crossing 200 meters ahead"?



373. Which traffic sign indicates "Manned level crossing 50-100 meters ahead"?



374. Which traffic sign indicates a "T-intersection"?



375. Which traffic sign indicates "Unmanned level crossing 50-100 meters ahead"?





376. Which of the following is dangerous driving?

- Crossing a red traffic light
- A punishable offence under section 184 of the MV Act
- Violating the stop line
- **All of the above are correct**

377. Parking a vehicle is prohibited within.....meters before or after a crossing or junction.

- **50 meters**
- 5 meters
- 100 meters
- 10 meters

378. A vehicle should maintain a minimum distance of how much from a vehicle with multi-tone horns or flash lights?

- 20 meters
- **50 meters**
- 75 meters
- 100 meters

379. Which section of the Motor Act is used to impose fines for the 2017 Motor Vehicle Driving Regulations?

- **Section 177a**
- Section 177
- Section 184
- Section 185

380. How far should warning triangles be placed behind a broken-down vehicle on a highway?

- 75 meters
- 10 meters
- 25 meters
- **50 meters**

381. In which year did the Motor Vehicles Amendment Act, which introduced automatic enforcement in India, come into force?

- **2019**
- 2018
- 2017
- 2020

382. In which rule is the syllabus for the driving test mentioned according to the Central Motor Vehicle Rules?

- Rule 11
- Rule 21
- **Rule 31**
- Rule 41

383. What is the purpose for which the Anti-lock Braking System is designed?

- To prevent the driving wheel from locking up
- To prevent moisture from accumulating within the braking system
- **To prevent the vehicle's wheels from locking during braking and to avoid the tires themselves from skidding**
- All of the above are correct

384. What is brake fade?

- Decrease in atmospheric air pressure
- Smooth braking progress
- **Reduction in braking effectiveness**
- Reduction of tire skidding



385. The turning circle of a vehicle means.....

- The number of turns of the steering wheel for the vehicle to turn in a circle
- The turning of the vehicle to round a corner
- **The amount of space required for a vehicle to turn in a circle**
- The number of turns of the steering wheel from left to right

386. Which traffic sign indicates a "petrol pump"?



387. Which of these indicates informational traffic signs?



388. Which traffic sign indicates "Parking on both sides"?





389. Which traffic sign indicates parking for motorcycles and scooters?



390. Which traffic sign indicates "Autorickshaw parking"?



391. Which traffic sign indicates a "Restaurant"?



392. Which traffic sign indicates a "Public Telephone"?



393. Which traffic sign indicates "Light Refreshment"?



394. Which traffic sign indicates a "Resting Place"?





395. What does "Carriageway" mean?

- The part or parts of the road normally used for vehicular traffic, or it may be divided into two by a dividing strip
- The entire road including the median
- A part of the road that also includes the footpath
- A special lane for stage carriages only, through which other traffic is prohibited

396. What does "construction zone" mean?

- A part of the road declared to be undergoing construction work, which may include the work area, traffic area, or buffer area
- The place where a new road is being built
- The part or parts of the road normally used for vehicular traffic, or it may be divided into two by a dividing strip
- A part of the road declared to be undergoing construction work, which may include only the work area

397. What does "transverse marking" mean?

- Road markings provided in the direction of traffic movement in the carriageway
- Road markings provided along the length for traffic movement
- Road markings provided at the junction
- Road markings near the junction

398. When a vehicle is kept stationary for any purpose other than loading or unloading persons, goods, or luggage, for more than three minutes, it is called.....

- Stopping
- Waiting
- Parking
- Setting up

399. "Rider" means

- Passengers traveling in a vehicle other than the driver
- The driver of a motorcycle
- Passengers including the motorcycle driver
- Passengers including the driver of a vehicle

400. The priority of a vehicle or any road user over another vehicle or road user on the road is called.....

- VIP vehicle
- Right of way
- Ambulance only
- Ambulance and fire truck only

401. Road markings mean

- markings seen only on the road surface
- all types of sign boards and marks
- includes markings on the road surface and all types of sign boards and marks
- lines, words, or markings drawn or taugth on the carriageway, curbs, or adjacent objects of the road to control, warn, and guide road users, excluding road signs



402. Stopping a vehicle for a very short period for passengers to get on or off or for quick loading or unloading of goods is called.

- Halting
- Parking
- **Stopping**
- Temporary parking

403. According to lab reports, doctor told a young man named A that his wife has a serious illness. This person, being very mentally disturbed, is returning home in his car. Can he drive?


- Since he has a valid driving license, he can drive at any stage
- **One must be in full physical and mental health while driving**
- He can drive avoiding highways
- All of the above are correct

404. While being a motorcycle or three-wheeler driver

- you can drive without holding the handle with both hands when driving on the highway
- you must hold the steering/handle with both hands at all times
- **the driver must hold the handlebar with both hands at all times except when giving a signal**
- you can always take one hand off the steering while driving

405. When seeing this sign on the road

- **the driver should slow down, give way to the traffic on the road he is approaching, and proceed with caution**
- should understand that the vehicle must be stopped because there is a traffic island ahead
- should understand that there are mountains ahead
- should understand to proceed with caution as there is a private junction ahead ¹⁴⁵²



406. What are the "Hand Signals"?

- There are five types: right, left, straight, stop, and reverse
- There are four types: right, left, stop, and slow down
- **There are four types: right, left, overtake, and stop**
- There are five types: right, left, overtake, slow down, and stop

407. Even if the green lights are on at a traffic signal, if a uniformed police officer signals to stop....

- **the driver must obey the uniformed police officer over the green signal lights and stop the vehicle until signalled to proceed**
- since the signal is green, the driver can proceed very quickly without obeying the police officer
- since the signal is green, the driver can move slowly and carefully without obeying the police officer
- since the signal is green, the driver can ignore everything else and proceed



408. What should a driver do when entering a tunnel?

- Turn on headlights on high beam, do not overtake, if stopped in unavoidable circumstances, turn on hazard lights
- Turn on headlights on low beam, do not overtake or reverse, if stopped in unavoidable circumstances, turn on hazard lights

Turn on park lamps, do not repeat or reverse, if stopped in avoidable circumstances, turn on lights

Sound the horn, do not repeat or reverse, if stopped in unavoidable circumstances, turn on park lamps

409. On mountain roads and steep roads, what courtesy should a driver of a vehicle adopt when the road is not wide enough for vehicles to pass freely?

- Both vehicles should drive in a low gear and not stop
- The vehicle going uphill should stop on the left and let the vehicle coming downhill pass first
- The vehicle coming downhill should stop on the left and allow the vehicle going uphill to pass first
- Both vehicles should stop and then move with caution

410. Which statement regarding "Parking" or "Stopping" is incorrect?

- Do not stop the vehicle in the yellow box marked on the road
- Do not stop the vehicle on a pedestrian crossing or 5 meters before it
- Do not stop the vehicle on a lane where speed is increasing or decreasing
- Do not stop the vehicle where the road is wide

411. Which of the following is not a reason for disqualification or cancellation of a license under Section 19?

- Driving a vehicle in a dangerous manner
- Obtaining a license by fraud or misrepresentation
- Obtaining a license before the permissible age
- Driving an unfit vehicle on a public road

412. Which statement regarding vehicle parking is incorrect?

- Do not park a vehicle in a public place where it is likely to cause an accident
- Do not park a vehicle in a manner that obstructs other road users
- Do not park a vehicle in a manner that causes unnecessary inconvenience to other road users
- A vehicle can be parked anywhere as the road tax is paid in advance for 15 years

413. Which of the following statements is incorrect?

- A vehicle used without registration will be seized
- If the Pollution Under Control certificate has expired, the vehicle will be seized
- Instead of seizing the vehicle, the officer can seize the registration certificate
- If a vehicle is used without a valid permit based on route, area, or purpose, the vehicle can be seized

414. Offences leading to the cancellation of registration?

- An offence under the Motor Vehicles Act is committed by a minor
- Using a vehicle in a public place without valid insurance
- Driving a vehicle without a valid license
- Driving a vehicle without wearing a seat belt¹



415. If an offence under the Motor Vehicles Act is committed by a minor, notwithstanding Section 4 or Section, such minor shall not be eligible for a driving license under Section 9 or a learner's license under Section 8 until the age of

- 21
- 25
- 30
- Not permitted to take a license for life

416. A police officer in uniform may arrest without a warrant anyone who commits the following offence in his presence...

- driving a vehicle dangerously
- driving a vehicle without valid insurance
- driving a vehicle without a valid license
- driving a vehicle without valid registration

417. What is the fine if a person in charge of a vehicle allows someone without a driving license to drive their vehicle?

- A fine of one thousand rupees
- A fine of 2000 rupees
- A fine of 5000 rupees
- A fine of 10000 rupees

418. What is the fine for a driver driving a vehicle without a valid license?

- A fine of 1000 rupees
- A fine of 2000 rupees
- A fine of 5000 rupees
- A fine of 10000 rupees

420. What is the maximum fine for driving, allowing to drive, or causing to be driven a light motor vehicle over the speed limit?

- A fine of one thousand rupees
- A fine of 1500 rupees
- A fine of 2000 rupees
- A fine of 3000 rupees

421. What is the fine for driving, allowing to drive, or causing to be driven a medium motor vehicle over the speed limit?

- A fine of 5000 rupees
- A fine of 4000 rupees
- A fine of 3000 rupees
- A fine of 1500 rupees

422. A driver of a vehicle is a police officer or other person authorised for the purpose by the State Government. If there is reason to believe that an offence has been committed, the driving licence of such driver may be impounded and handed over to the licensing authority for disqualification or revocation under section 19.

- Driving a vehicle under the influence of alcohol or drugs
- Driving a vehicle without insurance
- Driving without a valid PUC
- Driving without a valid license



423. A driver of a vehicle is a police officer or other person authorised for the purpose by the State Government. If there is reason to believe that an offence has been committed, the driving licence of such driver may be impounded and handed over to the licensing authority for disqualification or revocation under section 19.

- Driving a vehicle without insurance
- Driving without a valid license
- **Using the vehicle in an unsafe condition**
- Driving without a valid PUC

424. A driver of a vehicle is a police officer or other person authorised for the purpose by the State Government. If there is reason to believe that an offence has been committed, the driving licence of such driver may be impounded and handed over to the licensing authority for disqualification or revocation under section 19.

- **Driving without wearing a helmet**
- Use of the vehicle without registration.
- Driving without wearing a seatbelt
- Driving without a valid license

425. A driver of a vehicle is a police officer or other person authorised for the purpose by the State Government. If there is reason to believe that an offence has been committed, the driving licence of such driver may be impounded and handed over to the licensing authority for disqualification or revocation under section 19.

- **Driving with a pillion rider without a helmet**
- Driving a vehicle without insurance
- Driving without a valid license
- Driving without wearing a seatbelt

426. A driver of a vehicle is a police officer or other person authorised for the purpose by the State Government. If there is reason to believe that an offence has been committed, the driving licence of such driver may be impounded and handed over to the licensing authority for disqualification or revocation under section 19.

- Driving without wearing a seatbelt
- Driving without a valid PUC
- **Driving in a manner that prevents or hinders an emergency vehicle**
- Use of the vehicle without registration.

427. What is the maximum penalty for a driver who fails to move his vehicle to the side of the road when approaching a fire brigade vehicle or an ambulance or other emergency vehicle while driving?

- Rs 1,000 fine
- Rs 2,000 fine
- Rs. 5,000 fine
- **Rs 10,000 fine**



428. If any person who is authorised to give directions under the Motor Vehicles Act, intentionally violates any of the directions given by the authority or by law or obstructs such person in the discharge of his official duty and no other penalty is imposed for this offence, what is the maximum that the driver can get?

- Rs 1,000 fine
- **Rs 2,000 fine**
- Rs. 5,000 penalty
- Rs. 10,000 penalty

429. Moreover, if a driver is asked to furnish any information under the Motor Vehicles Act and deliberately conceals such information or furnishes information which he knows to be false or does not believe to be true and no other penalty is imposed for this offence, what is the maximum penalty that the driver is liable to pay?

- Rs 1,000 fine
- **Rs 2,000 fine**
- Rs. 5,000 penalty
- Rs. 10,000 penalty

430. What is the maximum penalty that can be levied if the owner of a motor vehicle makes a modification in the motor vehicle, including rearranging his vehicle parts in a manner that is not permissible under the Motor Vehicle Rules and Regulations?

- Rs 1,000 fine
- Rs 2,000 fine
- **Rs. 5,000 penalty**
- Rs. 10,000 penalty

431. What do you mean by H S R P?

- **High Security Registration Plate**
- Hologram Stamped Registration Plate
- Heat Stamped Registration Plate
- All of the above

432. How many places will the registration mark be displayed on the motor car fitted with H S R P?

- 2
- **3**
- 4
- 5
-

433. Which route is required to drive a heavy vehicle or a speed-controlled vehicle in carriage way,?

- the right-hand line
- any path.
- **The left path**
- No path specified
-



434. Man fined for not wearing seatbelt

Rs 500

A fine of Rs 500 license will be imposed

Rs 1000

A fine of Rs 1000 license will be imposed

435. What does it mean to be a Good Samaritan?

A person who assists in repairing a vehicle

A person who provides assistance to a person in an accident or takes them to the hospital

A person who stops at the scene of an accident and takes photos

A person who arranges rural transportation

436. Where is the green marking used on the road background?

Two-wheeler only line

Bus way

Public transport only

For bicycles only

437. What should be the colour of the under run protection at the rear

Red and white intermittent lines

Yellow and white zebra lines

Black and white intermittent lines

Red and yellow intermittent lines

438. What is meant by the gross vehicle weight of a vehicle?

The weight allowed to be carried in a vehicle

The empty weight of a vehicle

The total weight of the vehicle plus the permissible weight of goods that can be carried in the vehicle, as certified and registered

None of the above is correct

439. What is meant by the unladen weight of a vehicle?

The increase in the total weight of the vehicle and the weight of the permissible goods

Weight of the vehicle excluding the driver and attendant

Total weight of the vehicle including all the equipment normally used

Empty part of a vehicle

440. Duration of the driving license of a person aged 53

Up to the age of 60

Up to the age of 65

Five years Ten

years

441. Duration of the driving license to drive a vehicle carrying dangerous goods

One year

Two years

Three years

Five years



442. Duration of the driving license to drive a transport vehicle

- Three years
- Similar to a transport vehicle
- Ten years
- Five years**

443. What is the grace period allowed for renewal of a driving license

- No grace period**
- One month
- Three months
- One year

444. What is the penalty for modifying a vehicle contrary to the permit?

- Imprisonment for a period of up to one month or fine of Rs. 5000 or both
- Imprisonment for a period of up to three months or fine of Rs. 5000 or both
- Imprisonment for a period of up to six months or fine of Rs. 5000 or both**
- The head of the head for a period of up to one year or fine of Rs. 5000 or both

445. What is the validity period of a fitness certificate for a new transport vehicle?

- One year
- Two years**
- Three years
- None of the above is correct

446. What is the validity period of a registration of a new non-transport vehicle?

- Two years
- Five years
- ~~10~~ years
- 15 years**

447. Parts of the road that cannot be seen through the rear-view mirrors when looking

- ahead
- Black spot
- Non-vision area
- Blind spot**
- Accident prone area

448. What do you mean by MSM in driving theory?

- Mirror Slowdown Manoeuvre
- Mirror Signal Manoeuvre**
- Manoeuvre Signal Mirror
- Manoeuvre Slowdown Mirror

449. What do you mean by PSL in driving theory?

- Position Speed Look**
- Position Signal Look
- Pillar Signal Look
- Position Signal Look



450. Who is authorised to affix the registration number plate of a vehicle?

Vehicle Manufacturer
Dealer
Vehicle Owner
None of the above is correct

451. Where is the location of the third registration mark?

Left side of the rear windshield glass top
Right side of the rear windshield glass top
Left side of the front windshield glass top
Right side of the front windshield glass top

452. Pollution Control Certificate for New Vehicle

Exempted for the first two years
Exempted for the first one year
Exempted for six months
No exemption

453. What do you mean by NSD on a tire?

Non-stop drive
Non-skid drive
Non-skid depth
Non-stop depth

454. What is the term TWA related to?

Air conditioning
Wheel alignment
Tires
Brake system

455. What colour lights are allowed on a motor vehicle?

Amber red white
Blue red white
Amber white blue
Red white blue

456. What colour should a city service station garage be painted?

Vipin pink and water colour
Lime and white
Sky blue and white
Conor code not applicable

457. Which of the following should you hold the steering wheel of a vehicle equipped with airbags for the best control and safety?

Position 10-2
Position 11-1
Position 8-4
Position 9-3



458. What is the primary purpose of putting grooves in a tire?

- To increase the aesthetic appeal of the tire
- To maintain traction and improve fuel efficiency
- To provide traction and facilitate water distribution
- To reduce tread wear of the tire

459. Which law in India protects a citizen from legal or procedural obstacles for helping a person injured in a road accident?

- Road Safety Act 2007
- Kerala Police Act 2011
- Good Samaritan Act
- Motor Vehicles Act 2011

460. Under what circumstances will speed restrictions remain in place without official notification?

- When the restriction is in place for more than a month
- When the restriction is in place for less than a month
- Only on holidays
- When traffic is light

461. Which of the following is not a reason for an emergency vehicle driver to exceed the speed limit?

- To avoid serious injury to health
- To prevent a crime
- To extinguish a fire
- To reach an emergency meeting

462. What devices must an emergency vehicle driver operate when legally exceeding the speed limit?

- Sound a legal horn
- Multi-tune horn and multi-colour flasher
- Headlights only
- One multi-colour flasher

463. What is the maximum speed at which transport vehicles manufactured on or after 1 October 2015 must be equipped with a speed limiting device under the Motor Vehicles Act 1988?

- 50 km/h
- 60 km/h
- 70 km/h
- 80 km/h

464. What is the maximum speed to be set on the speed control device of all stage carriages, tipper lorries, heavy transport vehicles, tankers, vehicles carrying dangerous goods?

- 50 km/h
- 60 km/h
- 70 km/h
- 80 km/h



465. What is the maximum speed permitted for these IB/school buses and all vehicles used for transporting school children?

50 km/h 60 km/h 70 km/h 80 km/h

466. What is the maximum speed permitted for two-wheelers on all roads in Kerala except urban roads?

50 km/h 60 km/h 70 km/h 80 km/h

467. What is the current maximum speed limit for M1 category vehicles (motor vehicles used for passenger transport with not more than eight seats in addition to the driver's seat) on a six-lane national highway?

80/h
80/h 100 km/h 110 km/h

468. What is the maximum speed limit currently allowed on a four-lane national highway for M1 category vehicles (motor vehicles using a passenger vehicle with not more than eight seats other than the driver's seat)?

80 miles per hour
90 miles per hour
100 miles per hour
110 miles per hour

469. What is the maximum speed limit permissible near school area as per the Driving Regulations, 2017?

25 miles per hour 30 miles per hour 35 miles per hour 20 miles per hour

470. The driver should strictly adhere to the existing rules regarding prohibition of use and ensure that the same is followed by other staff and passengers.

alcohol
drugs
Smoking
All of the above

471. At least.....Learner's licenses to drive heavy medium transport vehicles will be issued to those who hold a driving license for driving a light motor vehicle.

one year's Two years Three years time Six-month



472. If you are driving at a speed of 30 km / hr, how many meters will you cover in one second? Approximately 2 meters. **Approximately 9 meters.** Approximately 18 meters. Approximately 36 meters.

473. When is the lane mat of the vehicle mandatory?

When the driver has to avoid an obstacle on the road
Choosing the right path before turning
When overtaking a speeding vehicle
All of the above

474. Driving is the repetition of three things which are they in the correct order?

Think Act See
Act Think See
See Think Act
See Act Think

475. Properly configured headrest allows you to..... when driving a car. will help

To make you more comfortable
Helps prevent neck pain
Help you relax
Help to maintain your driving position.

476. Mobile phones should only be used while driving.

When receiving a call
After the vehicle has come to a stop
Driving at a speed of less than 30 kmh
Driving an automatic transmission vehicle

477. What is the best way to avoid fatigue while driving?

Avoid driving at night.
Stop for a break
Can run without loading goods
drink two pegs of good quality whiskey

478. Which of the following types of glasses should not be worn while driving at night?

Half Moon
Circular
Bi-focal
Tinter

479. In which of the following situations is your stopping distance too much while driving?

In the rain
in the snow
in the night
In a strong wind



480. What should you do when driving in the dark, at sunset, or in the morning?

Use sunglasses to keep the headlight from hitting the eyes of other vehicles.
turn on your headlights on low beam
turn on the hazard warning lights
You can drive very fast.

481. Which of the following is the most dangerous on the road?

Motorcyclists
Cyclists
Pedestrians
All of the above

482. In what situations do you allow other drivers to flash their headlights at you?

**to give advance notice of their presence when crossing
to warn you that you are in danger.**
Warning when you're speeding
Let them know you're on your way

483. Which of the following statements is true?

Pedestrians have no right to walk on the road.
Zebra closings should only be given the right of way
Pedestrians have the right to an uncontrolled pedestrian crossing
None of the above is correct.

484. What do you do when driving in wet weather?

Drive in the middle of the road to avoid splashing water on pedestrians
Beware of pedestrians walking at high risk
help an elderly person to cross the road
Drive at a specified speed limit

485. The holder of a learner's license may not drive a vehicle except in the following manner:

Less than 50 miles per hour
in the night
Be accompanied by a licensed person who can control the vehicle
It's only day time

486. At what point do you stop the car?

When the vehicle is involved in an accident
at a red traffic light
When a police officer stops
All of the above

487. Why do you need to make sure that your signal lights stop after turning?

To avoid overcharging the battery
To avoid misleading other road users.
In order not to surprise other road users
To avoid damage to the indicator relay



488. How far away from the vehicle in front of you?

15 meters.

10 meters

It depends on the speed of the vehicle in front of you.

a sufficient distance to avoid a collision if the vehicle in front of you suddenly slows down and stops

489. What does it mean when other drivers flash their headlights at you?

There's a radar speed trap in front.

They are making way for you.

They warn you of their presence.

There's something wrong with your car.

490. What should you do if you see a warning light on your vehicle's instrument panel while driving?

Continue if the sound from the engine is correct

This is only a temporary power outage.

Deal with the problem in time

Fix the problem quickly and safely.

491. Which of these must be in good working order for your car to be transportable?

Speedometer

horn

Windscreen wiper

All of the above

492. What is the most effective tool for protecting passengers in the event of an accident?

Seat belt

safety door latches

Padded Instrument Panel

None of the above is correct.

493. What do you do when you're sitting in the driver's seat driving a friend's car and feel like you're sitting far away from the steering wheel and the control of the other vehicle?

You should never use someone else's car.

Don't use someone else's car seat.

Adjust the seat forward to suit you.

Drive the vehicle in the same position.

494. What should be the colour scheme of the number plates of private vehicles?

Black background and white numbers.

Yellow background and white numbers.

Black and white background

White background and yellow numbers

495. If you have a valid driver's license for a light motor vehicle, which of the following vehicles are you allowed to drive?

only the motor car.

Motorcycles and motorcycles over 50cc.

all motor vehicles.

Motorcycle



496. What does the insurance company do if you are involved in an accident while driving without a valid driver's license?

- Compensation to be paid for damages
- Compensation will be given for all damages.
- No compensation for losses**
- Compensation will be given in case of death.

497. When will you be prosecuted for driving on the road without a valid driver's license?

- Only when you're in an accident
- When the enforcement officer inspects your vehicle**
- No penal action will be taken
- When the license or registration is renewed in the office

498. What do you do if your car is involved in an accident?

- Report to the nearest police station and take people to the hospital**
- No need to report to the police station.
- Accident victims should be taken to the hospital even if they do not report to the police station
- Don't stop the vehicle at the accident site

499. Is it a crime to obstruct the clear view of your number plates?

- Since there are three registrations, it is enough to display any one
- Yes, all the time.**
- No, you are allowed to forget your number mistakes if you want.
- Yes, but hiding the PIN number plate is not a hindrance.

500. What are the basic steps to be taken after an accident?

- Protect the area
- Inform the authorities
- Care for the injured
- All of the above**

501. What phone number do you need to dial in case of a medical emergency to get help in an ambulance?

- 102 103 **108** 105

502. How to stop a vehicle with the help of gears?

- Bringing the gear to neutral
- Switching off the engine
- Lowering the gears one by one**
- Pressing the clutch brake at the same time

503. Which of the following can cause you to lose concentration while driving?

- Loud music
- Arguing with a passenger
- Using a mobile phone
- All of the above**



504. Boredom on a long journey can make you sleepy, so you should do this

Find a safe place to park your vehicle off the road and allow fresh air to enter your vehicle

Look at the surrounding landscape and enjoy the beauty

Drive fast to complete your journey quickly

Park the vehicle on the shoulder of the road for rest

505. Which of these is required by law to maintain a vehicle in good condition?

Headlights

Windscreen

Seat belts

All of the above

506. You are carrying two 13-year-old children and their parents in a car. Who is responsible if you see that the children are not wearing seat belts?

The children's parents

You, the driver of the vehicle

The passenger

The children

507. Noise pollution can cause

Mental health problems

Impaired concentration

Loss of hearing

All of the above

508. What should you do if a driver does something that bothers you?

Try not to react

Let them know how you feel

Flash your headlights several times

Honk your horn

509. How should you respond to a less experienced driver?

Honk your horn to alert them to your presence

Be patient and be prepared for their slow reaction

Flash your headlights to indicate it is safe for them to proceed

Pass them as quickly as possible

510. When can you flash your headlights for other road users?

To show that you are giving way

To show that you are going to turn around.

To let you know that you are a priority

To make your presence known

511. What is the harm of depressing the clutch pedal too much or allowing the vehicle to run in neutral for too long while driving?

Will use more fuel

Causes the engine to overheat

Your control is decreasing.

Tire wear and tear also improves



512. Why is it dangerous to step on the clutch or put the gear in neutral when your vehicle is going down a steep hill?

Will use more fuel

Your vehicle will speed up and you will lose control.

Will cause the engine to overheat and be damaged.

Tire improvement

513. When you drive in very heavy rain, is the stopping distance of your vehicle likely to be...?

To increase

To decrease

To increase up to tenfold

To continue as before

514. What is the legal minimum insurance requirement for driving on new roads?

Third party, fire, and theft should be covered.

Fully protected

Third party only

Personal injury coverage

515. You have purchased a second-hand vehicle. When should you notify the registry to change ownership? **Within 14 days**

Within 28 days

Within a month

Only when you can insure it.

516. Which of these should you do if you are the first to arrive at the scene of an accident?

Switch off the vehicle engine.

Remove injured people from vehicles

Call emergency services.

All of the above

517. Your indicators may be difficult to see in bright sunlight. What should you do?

Use an indicator along with a hand signal.

Place your indicator early.

Step on the brake several times to show the stop lights.

Turn around as fast as you can.

518. Under what circumstances can your vehicle be seized?

Driving a vehicle without registration

When unnecessary headlights flash

When registration numbers are written in the wrong dimensions

When modifying a vehicle

519. What does the law require regarding uncontrolled pedestrian crossings?

Speed up to avoid hitting pedestrians at a pedestrian crossing.

Slow down.

Stop and give priority to pedestrians at pedestrian crossings.

Speed up and be mindful of pedestrians already at the crosswalk.



520. What should you do when other vehicles flash their headlights at you at night?

Slow down or stop if necessary

Move the vehicle to the left side of the road, slow down, and turn your headlights to low beam.

Dim your headlights continuously.

Increase the speed of the vehicle.

521. A cover note is a document that you are given before receiving.....

Driving license

Registration certificate

Insurance certificate

PUC certificate

522. What should you do if you see a fire in your vehicle?

Immediately move the vehicle to the side of the road, turn off the engine and all electrical switches, get all passengers out of the vehicle, and try to extinguish the fire with sand or a thick cloth.

Immediately move the vehicle to the side of the road, turn off the engine, and douse the fire with water on all electrical switches and burning wires.

Do nothing but call the fire department.

Leave the vehicle on the road until the fire department arrives.

523. Why should you not drive with your foot on the clutch for longer than necessary?

Reducing vehicle control

Clutch wear occurs suddenly

Fuel consumption increases

All of the above

524. What is the function of the choke in a vehicle?

Enrich the fuel in the air-fuel mixture

Enrich air in air fuel

Avoid the presence of water in the air-fuel mixture.

Increase air pressure

525. If your vehicle has third party insurance, what does it cover?

Injury to another person

Damage to someone else's property

Damage caused by other vehicles

All of the above

526. What is the main reason why your vehicle's stopping distance increases after heavy rain?

You can't see the big holes.

The brakes are wet and slipping.

Your tires have less grip on the road.

The water on the screen obscures your view of the road ahead.

527. When loading your vehicle, you must ensure that the load is.....

Safe

It will be easier to unload.

Do not cause damage.

Do not damage the vehicle.



528. What should you understand when you see a pedestrian standing on the road with a stick?

- Disabled person
- Deaf
- Elderly
- Blind**

529. What should you do if you see roadworks while driving and a temporary maximum speed limit sign?

- Follow the sign on weekdays.
- Follow the sign at all times.**
- Follow the signs if the paths are narrow.
- Follow the sign at night.

530. Why is passing a trailer more dangerous than passing a car?

- Because trailers are longer than cars**
- Trailers may suddenly increase speed
- Trailer brakes aren't that great.
- Trailers climb hills more slowly

531. What should the driver check before starting the vehicle?

- You should check if you see the registration number.
- Make sure the tire pressure is correct.
- Check fuel coolant or oil leaks
- All of the above**

532. What is illegal when driving a four-wheeled vehicle?

- Incorrect operation of all lights and indicators
- Seat belt not used
- Both of the above**
- None of the above

533. The following things should always be kept in mind while driving a vehicle:

- Road conditions and weather
- Vehicle type and traffic conditions
- Your own ability **All of the above**

534. When you are overtaking your vehicle and another vehicle is passing, you should not...

- Giving a hand signal
- Slow down your vehicle.
- Use headlights
- Increase your speed.**

535. Who is responsible for ensuring that the vehicle is not overloaded?

- passengers
- Loader
- Driver of the vehicle**
- None of the above



536. Which of the following road users is at risk of injury when large vehicles pass at high speed?

- Cyclists
- Pedestrians
- Two-wheeler passengers
- Everything said above**

537. What precautions should you take if your steering suddenly feels soft while you are driving in heavy rain?

- Drive the vehicle to the side of the road.
- Gently acceleration the vehicle
- Brake hard to slow down.
- Stop vehicle acceleration**

538. What should you do if you are following a large vehicle on a wet road and the spray of water from the vehicle in front blinds you?

- Back the vehicle until you can see better.**
- Turn the vehicle's headlights on full brightness.
- Drive the vehicle in a manner that does not hit the spray of water while approaching a larger vehicle.
- Increase vehicle speed and overtake quickly

539. Why should you keep a good distance from the vehicle in front of you when you are driving in fog?

- To avoid accidents in the event of sudden changes in direction
- To avoid accidents without fog lights
- To avoid accidents in the event of a sudden stop**
- In case the brake lights are on

540. What harm does air pollution cause?

- For humans
- For plants
- For animals
- All of the above**

541. What happens if the wheels of a vehicle are not properly balanced?

- The vehicle will pull to the right.
- The vehicle will be pulled to the left.
- There will be vibration in the steering wheel.**
- All of the above

542. When should a driver lend his driving license to someone else?

- While teaching driving
- At any time**
- For an unlicensed person to claim insurance
- If he knows that person well

543. What should you do if your vehicle hits a pedestrian?

- After introducing yourself, leave.
- Help the person and call an ambulance.
- Help the injured person, introduce yourself, and then report to the police.**
- There is nothing in the above.



544. Stickers, posters, and other unofficial items should not be placed on the windshield of an automobile because?

It is illegal to advertise in this way.

They obstruct the driver's view.

Other drivers can't see you.

The smooth operation of the wiper will be affected.

545. A person whose driving license has been suspended or revoked.....

Can drive in an emergency

Drive only if you are accompanied by a valid driving license holder.

Under no circumstances will you be allowed to drive a vehicle

You can drive to stop a group.

546. Providing a motor vehicle loan for driving to a person without a valid license.....

No fault as only the borrower is responsible

Serious crime

It is only a crime if the vehicle is involved in an accident.

None of the above

547. Driving a vehicle with pollution levels above the limit prescribed by law.

Only allowed in emergencies

It is a crime.

They are liable to strict warning from the authorities.

Drive the vehicle slowly.

548. The sounding of a multi-tone horn in a motor vehicle

Only allowed in emergencies

It is illegal because it causes noise pollution.

Liable to the warning of the authorities

Not a crime

549. The goal of first aid

To save lives

To promote recovery

To prevent the victim's condition from worsening

All of the above

550. Alcohol may have adverse effects

Reducing alertness

Affects concentration

Decision making is a loss

Everything said above

551. What effect does increasing the speed of a vehicle have on stopping distance?

There is no difference in stopping distance.

Stopping distance decreases as speed increases.

The higher the speed, the longer the stopping distance.

None of the above



552. Which of the following should be done when starting a vehicle?

- The gear must be in neutral.
- The parking brake must be on.
- The clutch pedal must be pressed.
- Everything said above**

553. Speeding

- Gives you the best fuel average
- Not having enough time to respond to accidents**
- Your journey will take some time.
- Reduces damage to your engine

554. Basic rules for driving on highways

Use a less trafficked route

Drive in the left lane unless overtaking.

Cross it on the clearest side.

Try to keep the speed limit to 50 km/h to avoid congestion.

555. Causes of vehicle pollution

Poor maintenance

Excessive weight of vehicles

For frequent traffic

Everything said above

556. Which of the following affects the stopping distance of a vehicle?

- Vehicle speed
- Condition of the vehicle's tires
- Weather
- Everything said above**

557. What can you do to reduce congestion on the roads?

- Use public transportation more for travel
- Avoid unnecessary trips.
- Walk or cycle for short journeys.
- Everything said above**

558. How can we help prevent environmental pollution?

- Service your vehicle properly.
- Fill vehicle tires with the correct amount of air
- Don't drive excessively in low gears.
- Everything said above**

559. A properly serviced vehicle will be given...

- Low insurance premiums
- Your road tax refund
- Excellent fuel efficiency and clean exhaust emissions**
- None of the above



560. What should you do if you notice a ball coming in front of your vehicle?

- Keep driving at the same speed and honk your horn.
- Keep driving at the same speed and flash your headlights.
- Slow down and prepare to stop for children.**
- Stop the vehicle and wave to the children to bring their ball.

561. Be careful when overtaking in a driving instruction vehicle with the 'L' mark because...

- Their intention is to always drive in the left lane.
- This will reduce their confidence.
- They may panic and it may lead to danger.**
- They are generally not healthy.

562. What should you do when you approach a bus that is about to leave from a bus stop with a signal?

- Pass by before it moves.
- Let the bus pass if it is safe.**
- Flash your headlights as you approach.
- All of the above

563. What should you do if a passenger on a motorcycle cuts you off sharply?

- Honk.
- Brake hard.
- Keep a safe distance.**
- Flash your lights.

564. What should you do if your vehicle enters an intersection without a signal and people are crossing in front of your car?

- Continue driving without slowing down.
- Slow down, be careful.
- Stop and let pedestrians pass.**
- Honk.

565. If you want to make a "U" turn and there is a policeman at an intersection controlled by a traffic light, what should you do?

- Drive to another intersection without a traffic light.
- Wait for the "U" turn until the traffic light turns green.**
- If there is a policeman at the intersection, you can make a "U" turn.
- Avoid making "U" turns.

566. When you enter an intersection, when should you check for traffic on your left and right?

- Always before entering an intersection**
- Only when it's busy.
- Only when you approach a stop sign
- When you are on a highway a

567. You are driving around a bend and see some loose gravel ahead. What should you do in this situation?

- Check your mirrors and change lanes.
- Speed up and drive as fast as possible over the gravel.
- Slow down and move forward.**
- Stop the vehicle.



568. What should you do if you start to overtake the car in front and see its right turn signal flashing?

- Try to overtake the vehicle as quickly as possible.
- Immediately apply the brakes and stop the vehicle.
- Flash your headlights and speed up.
- Check your mirrors and move to the back of the car.**

569. Under what circumstances can you cross a continuous yellow or white line in the middle of the road?

- Do everything when you feel safe.
- When there is no traffic in Havana from the opposite direction
- Under no circumstances**
- Avoid if possible.

570. What do two continuous yellow lines in the middle of the road indicate?

- Overtaking is allowed.
- Overtaking is not allowed.
- Both overtaking and turning right are not allowed.**
- Overtaking is not allowed, but turning right is allowed.

571. What should you do if you are approaching a pedestrian crossing controlled by a traffic signal and the signal has turned green for you but pedestrians are still crossing?

- Slow down and give way to pedestrians.**
- Speed up because the signal is in your favor.
- Speed up but watch out for pedestrians
- Flash your headlights to warn other passengers and stop.

572. What does the flashing red light in the interior section mean?

- You should slow down and drive more carefully.
- You must slow down and give way to vehicles coming from the left or right.
- The signal light is not working, so you must proceed with caution.
- Vehicles must stop and give way to vehicles in priority order. Proceed only if there are no obstacles on the way.**

573. As you approach an intersection, the green signal changes to an amber light. What should you do?

- Pass quickly.
- Brake and cross slowly.
- If you are crossing the stop line or are too close to it to stop safely, proceed with caution.**
- Cross or stop if there is no policeman.

574. What should you do if the traffic light is amber as you approach the stop line at an intersection? Get ready to go. If there are no obstacles in the way, go. If pedestrians are not crossing, move on.

- Be prepared to stop before the stop line.**



575. How should you give a hand signal if you decide to stop while driving?

Hold your right hand horizontally and extend it palm down.

Extend your right arm, bend your elbow at a right angle, and turn your palm forward.

Extend your right arm and rotate it in a circle.

None of the above

576. What precaution should be taken when entering an intersection with a flashing amber traffic light?

Slow down and proceed with caution.

Stop safely if possible.

Keep going at the same pace.

Rush through the signal.

577. What should you do before your vehicle turns onto the road?

Check around for other road users.

Use another route if possible.

Place your whole hand on your handbrake.

Turn on your headlights.

578. Which of the following should you do before stopping?

Honk.

Use mirrors

Select a higher gear.

Flash your headlights.

579. What should you do when moving from behind a parked car onto the road?

Look around before you go.

Check all the mirrors in the vehicle.

Give a signal.

All of the above

580. What should you do when you are following an ambulance showing flashing multi-coloured lights?

Stop safely and move the vehicle as quickly as possible.

Increase speed and drive as fast as possible.

Maintain your speed and pace.

Pull over hard and stop on the road immediately.

581. In which of these places should you not park or wait?

At a bus stop

Opposite a traffic island

In front of someone else's gate

All of the above

582. In which of these places should you not park?

Near a school entrance

Near a police station

On a side road

All of the above



583. Which place should not be used for reversing a vehicle?

- On a busy road
- One-way road
- In a round bottle
- Everything said above**

584. What should you do if you are not sure it is safe to reverse your vehicle?

- Honk.
- Start your engine.
- Get out and check.**
- Reverse slowly.

585. When can you turn from a side road onto a main road?

- Only if there is no traffic congestion on both roads
- Not allowed at any time**
- At any time
- Only when the main road is clear of traffic

586. What precautions should you take when traffic lights are out of order?

- Move slowly.
- After stopping, look to the right and left and proceed with caution.**
- No precautions needed.
- Move at the same speed.

587. Which of the following should not be done when approaching a road construction site?

- Start to overtake and increase speed.**
- Flash your headlights.
- Give any signals.
- Nothing is given.

588. What is the best reason not to follow other vehicles too closely?

- To avoid exhaust fumes
- To prevent mud from splashing from the tires of the vehicle in front
- To increase visibility of traffic conditions and avoid hitting vehicles in front if you stop suddenly**
- Because your vehicle's operation requires less attention

589. What should you do when approaching from behind at a signal that has stopped two lanes of traffic?

- Overtake all vehicles and stop in front of them.
- Pass through all vehicles standing in two lines.
- Stop behind the last vehicle in the appropriate lane.**
- Stop somewhere.

590. What should you do if you can't turn on your left on a freeway and are going forward?

- Continue to the next appropriate exit.**
- Stop the vehicle and reverse to the exit.
- Stop immediately and turn back.
- Reverse by looking at the rear view meter.



591. What is the most important thing to pay attention to when driving in an area with a lot of pedestrians (for example, a bus stop)?

Honk your horn repeatedly.

Put your headlights on high beam so they can see you better.

Increase your speed to avoid getting caught by them.

Slow down and check to see if they are entering the road before proceeding.

592. What should you do if a vehicle in front of you stops at a pedestrian crossing?

Do not overtake a vehicle.

You can overtake a vehicle if there are no passengers at the crossing.

If no other vehicles are coming, you can overtake the vehicle.

Make your phone ring repeatedly.

593. If you want to turn onto the road on the left, you should drive.....

As close to the left side of the road as possible

As close to the right side of the road as possible

In the middle of the road to make it easier for the vehicle to turn

On the right or left side of the road, as per convenience

594. If you want to turn onto the road to the right, you should drive....

With the right signal indicator

Close to the centre of the road you are traveling on

Get as close to the left side of the road as you enter.

All of the above

595. In which of the following situations is overtaking prohibited?

If doing so alone is likely to cause inconvenience or danger to any other designated traffic

If the vehicle is approaching a curve or hill and the road ahead is not clearly visible, Unless the driver of the vehicle in front of you signals that you can overtake him/her

All of the above

596. You should slow down the vehicle....

When approaching a road inner section

When approaching a road junction

When approaching a pedestrian crossing

All of the above

597. What hand signal should you give if you are going to turn left?

Extend your right hand palm down towards the right side of the vehicle and move it up and down several times.

Extend your right forearm vertically out to the right side of the vehicle and raise your palm forward.

Extend your right arm to the right and turn it counterclockwise.

Extend your right arm horizontally to the right side of the vehicle with your palm facing forward.



598. In which of the following places can you park your vehicle?

- Near the traffic light
- Near the crossing
- On a busy main road
- None of these**

599. While driving on a narrow road at night, a vehicle ahead of you has been signalling to turn right for some time and is moving slowly. What should you do?

- Hide on the left side
- Flash your headlights before overtaking.
- Pull over to the right and honk your horn.
- Wait for the signal to cancel before overtaking.**

600. When are you allowed to park your vehicle on a road without turning off the engine?

- If you park your vehicle below 5 minutes
- If the battery is bad
- When in a 20 kmph zone
- No way.**

601. When driving down a hill...

- Use top gear for best performance
- Use neutral gear to reduce engine noise.
- Use the same gear selection as driving uphill.**
- Drive with the ignition off to save fuel

602. Braking hard on a steep curve will make your vehicle...

- more stable,
- unstable,**
- stall,
- and turn safely

603. Even if your traffic signal gives you a clear path, you should...

- Be prepared to stop
- Honk your horn repeatedly
- Watch out for drivers who are not obeying traffic signals**
- Don't drive in foggy conditions

604. What should you do if there is an obstacle on your side of the road

- Keep going, you have the right of way
- Oncoming vehicles should wave
- Give way to oncoming traffic**
- Increase speed to pass first

605. What should you do when you enter a road with humps?

- Maintain a slow speed throughout**
- Increase speed between each
- Always maintain the maximum legal speed
- Drive slowly only during school hours



606. What hand signal is used for a “U” turn?

- Left turn signal
- Slow down signal
- Right turn signal**
- U-turn signal

607. Pedestrians should not cross the road from behind a vehicle or near a bend. Why?

- Cross where there is a road sign
- They can be difficult for pedestrians
- Can be scary for children
- Drivers of other vehicles cannot see the person crossing the road**

608. What should you do when you approach a star-guided junction?

- Use hazard warning lights to proceed
- Use flashing headlights to pass the junction
- Slow down your vehicle**
- Maintain your speed and honk your horn

609. When going straight ahead on a roundabout

- Signal right and then left
- Signal not required**
- Use hazard warning lights
- Use flashing headlights to indicate you are going straight

610. Your vehicle pulls to one side when braking What should you do?

- Change the surrounding tires
- Pump the pedal when braking
- Use the handbrake at the same time to stop the vehicle
- Consult your mechanic**

611. To prevent brake slippage when going downhill?

- Select neutral for a short distance
- Press the brake pedal continuously
- Select the appropriate high-power gear and apply the brake only when necessary**
- Descend the vehicle in top gear and apply the brake only when necessary

612. What should you do if the front tire bursts while you are driving on the road?

- Loosen the grip on the steering wheel
- Lock the steering wheel to any extreme position and apply the brake Brake firmly for emergency stopping
- Hold on to the steering wheel and stop safely using the brake**

613. What should you do if your vehicle skids while driving?

- Turn the steering wheel left and right
- Apply the parking brakes
- Turn the steering wheel in the direction the car is skidding**
- Turn the steering wheel in the opposite direction the car is skidding



614. Which of the following should you do when cornering or making a sharp turn?

- Choose the appropriate gear
- Adjust your speed
- Keep to the left
- All of the above**

615. What causes hard steering?

- Poorly worn tires
- Overinflated tires
- Under inflated tires**
- All of the above

616. Driving at high speeds

- Gives you better fuel efficiency
- Takes less time to complete your journey
- Reduces time to respond to an accident**
- All of the above

617. How to avoid rough driving?

- Use the parking brake gently
- Apply the service brake quickly
- Slow down using only the gears
- Take pre-planned action in using the brakes**

618. How many people can be carried in the cargo compartment of a truck?

- One additional person
- As shown in the permit
- As shown in the registration certificate
- None of the above is correct**

619. What are the basic safety requirements for a two-wheeler?

- Sari Guard
- Food Trust for Pillion Rider on Both Sides
- Profession for Pillion Hand Holds
- All of the above**

620. The safest way to descend a steep descent

- High torque gear with brake**
- Use top gear with brake
- Use brake and clutch simultaneously
- Using brake and clutch in high torque gear

621. What do the broken lines with large gaps in the middle of the road indicate on an undivided road?

- Warning lines
- Not an overtaking zone
- If there is no vehicle coming from the other side, you can overtake**
- Pass with caution



622. What do the broken lines with small gaps in the middle of the road indicate on an undivided road?

Warning lines

Not an overtaking zone

If there is no vehicle coming from the other side, you can overtake

Pass with caution

623. What do the continuous white lines with solid white lines in the middle of the road indicate on an undivided road?

Warning lines

Not an overtaking zone

If there is no vehicle coming from the other side, you can overtake

Pass with caution

624. What does the broken white line on the border edge line of the road indicate on an undivided road?

Do not cross the line

Parking area

A crossing indicates a cross road

Stop before proceeding

625. What do ladder hatching signs in the middle of the road indicate?

Equal to a median and overtaking is prohibited

Overtaking is allowed if there is no vehicle coming from the opposite direction

Overtaking is allowed on both sides

Vehicles can be parked in the liquor section

626. What do the reverse hatch signs on the border line indicate?

Reversed parking area

For emergency overtaking

Not intended for parking or driving on a pedestrian road

Side road indication

627. Where the road is slippery road sign is seen, the driver

Change gears to slow down

Apply sudden brakes to slow down

Continue at the same speed if you feel safe

Press the brake as well as the clutch to avoid skidding

628. What should you do when you reach an intersection with no signal lights or police officers?

Give way to traffic coming from other roads into the intersection

Proceed by giving the correct signal and ringing the phone

Give priority to vehicles approaching the intersection from your right, then proceed

after giving the required signals

Give priority to vehicles approaching the intersection from your left, then proceed after giving the required signals



629. What is tail-gating?

- Driving dangerously close to the vehicle in front
- Maintaining a safe distance from the vehicle
- Maintaining a distance of at least 7 meters from the vehicle in front
- Driving dangerously close to the vehicle behind**

630. What is defensive driving?

- Driving with caution, anticipating violations of traffic rules and road signs by drivers and other road users**
- Driving with the sole aim of reaching the destination without regard to road signs
- Driving with the assumption that you will be careful about the safety of other road users
- All of the above

631. When loading goods on lorries

- Goods can be pushed up to 30 centimetres on both sides
 - Goods should not be pushed up to both sides**
 - Goods can be pushed up to 50 centimetres on both sides
 - Goods up to 100 centimetres on both sides
632. When there is a vehicle on a roundabout.....

- Priority for vehicles entering a roundabout
- Priority for vehicles leaving a roundabout
- Priority for vehicles on a roundabout**
- All of the above

633. You are invited to take action when you leave a vehicle in a dangerous position

- Section 121
- Section 122**
- Section 185
- Section 129

634. When using a vehicle with left-hand steering control

- Display a warning sign "Left-hand drive"
- Use a mechanical or electrical signalling device
- With both of the above**
- Left-hand steering vehicles are not allowed to drive

635. Use of red/purple road markings as a warning

- To help people understand the danger**
- To understand the smooth flow of traffic
- To know the busy roads
- To know the roads with poor visibility

636. Applying double stop lines

- Traffic Signal and in front of pedestrian crossings
- To indicate road intersections
- At junctions controlled by stop signs**
- At the entrance to roundabouts



637. Motorcyclists usually cause accidents by

- Speeding
- Triple riding
- Driving in a zigzag manner and passing too close to vehicles
- All of the above

638. What is the main purpose of first aid?

- To reduce pain and prioritise accident treatment
- To prevent the injury from getting worse and its consequences
- To protect the injured person from further harm
- All of the above

639. When you drive a vehicle from a parallel parking space onto the street, what should you do?

- Honk and pull out slowly
- Proceed with caution after making sure that there are no vehicles in the vicinity that could cause a hazard
- Signal to other traffic and proceed with caution
- All of the above

640. What should a driver do when approaching intersections with solid line turning lanes?

- Change lanes recklessly
- Continue in the lane intended for the intended direction
- Move freely into another lane
- Ignore lane markings

641. When approaching a straight-ahead intersection.....

- Move to the right lane
- Move to the centre lane of the intersection
- Move to the centre lane at least 200 meters ahead
- Move to the centre lane at least 50 meters ahead

642. What should a driver check before making a U-turn?

- Oncoming traffic only
- Weather conditions
- Blind spots and traffic in all directions
- Fuel price in the vehicle

643. When does the right-of-way rule not apply to vehicles coming from the right?

- When the vehicle is parked
- When the intersection is controlled by traffic lights or signs
- When vehicles are moving slowly
- When the road is empty

644. What should a motor vehicle do if traffic is stopped at an intersection?

- Enter the intersection carefully
- Honk your horn to alert other drivers
- Drive through the intersection at a reduced speed
- Wait for traffic to clear before entering



645. What should you look for in relation to your tires when approaching your vehicle?

Make sure they are at the correct pressure and have no visible damage

Check that the tires are the correct colour

Look for any decorative hubcaps

Make sure the tires match the brand of the vehicle

646. What should you do with your belongings before entering the vehicle as part of the cockpit drill?

Leave them outside the vehicle for later retrieval

Make sure they are secure and do not interfere with your ability to drive the vehicle

Keep them on the trail regardless of their weight

Hold them in your lap while driving the vehicle

647. Which of the following is not an important element of defensive driving?

Keeping a safe distance

Constantly scanning the road for potential hazards

Use your horn frequently to warn other drivers

Be aware of other drivers' behaviours and intentions

648. How does keeping a safe distance contribute to defensive driving?

It allows you to pass other vehicles more easily

It gives you plenty of time to react to sudden stops or emergencies

It helps you gauge the speed of oncoming traffic.

It reduces the chance of getting a speeding ticket

649. What should you do if another driver becomes aggressive or behaves erratically while practicing defensive driving? Interact with them to establish your position **Ignore them and maintain your speed and distance** Try to pass them to demonstrate your competence Follow closely to make sure they don't cut you off

650. What should you do if another driver is tailgating you?

Increase speed to maintain distance

Maintain your current speed

Reduce speed to increase distance

Stop suddenly

651. What should you do when driving in heavy traffic?

Maintain a safe distance and be alert

Steer through traffic

Use your phone frequently

Use your horn for navigation

652. When is the braking distance longer?

If the vehicle is being driven at high speed

If the driver is distracted or tired

If the vehicle is being driven under the influence of drugs or alcohol

All of the above

659. Which of the following is meant by “traffic island”?

- (I) A physical system constructed at an intersection to control vehicular traffic
 - (II) Physical systems at or near an intersection to control vehicular traffic
 - (III) Also includes road markings marked on a vehicular lane
 - (IV) Physical systems and road markings marked on the vehicular lane at or near each intersection to control vehicular traffic
- (I) only is correct
(I) and (II) only are correct
I) and (II) only are correct
All four are correct

660. Which of the following is meant by “right of way”?

- (I) The right of a vehicle to proceed lawfully in preference to another vehicle
 - (II) The right of any road user to proceed lawfully in preference to another vehicle or any other road user
 - (III) The right of a vehicle or any other road user to proceed lawfully in preference to another vehicle
 - (IV) The right of a vehicle or any other road user to proceed lawfully in preference to another vehicle or any other road user approaching means
- (I) only is correct (II) only is correct (III) only is correct
All four are correct

661. “Stopping” means stopping a vehicle for a very short period of time or

- (I) Stopping to allow passengers to board or alight
 - (II) Stopping for the purpose of loading or unloading goods
 - (III) Stopping either for the purpose of loading or unloading passengers or for the purpose of loading or unloading goods
 - (IV) None of the above conditions are prescribed
- Only (I) is correct
(II) is correct
(I) and (II) and (III) are correct
All four are correct

662. “Traffic marking” means road markings provided on the of a road

- Across**
In the direction of traffic
Parallel
All are correct

663. Which of the following is meant by “road”?

- (I) Bridges, tunnels, corridors, ferry facilities, interchanges, roundabouts, traffic lights
 - (II) Road dividers, all traffic lanes, acceleration and deoxidation lanes, medians, strips, overpasses,
 - (III) Underpasses, approaches, access roads, off ramps, toll plazas A road under construction
 - (IV) Any private road
- (I) only is correct
(I) and (II) only are correct



653. The speed of a motorcycle with a four-year-old child riding on the back should not exceed

- 20 km/h
- 30 km/h
- 40 km/h
- 50 km/h

654. What safety precautions should a motorcycle driver take when riding with a child between the ages of 9 months and four years?

- Safety harness
- Crash helmet
- Not to exceed 40 kmph
- All of the above

655. A motor vehicle specially designed, constructed or modified under sub-section (2) of section 52 for the use of a person with any physical disability is called.....

- Invalid carriage
- Handicapped vehicle
- Adapted vehicle
- Altered vehicle

656. Gross vehicle weight of the vehicle is..... vehicle above is called a heavy vehicle, or a heavy goods vehicle, or a heavy passenger motor vehicle

- Rs 5000,000
- kg 12,000
- kg 5,000
- kg

657. "Road user" means who among the following?

- (I) A person driving a vehicle
- (II) A person travelling on a road in a vehicle
- (III) A person travelling on a road other than in a vehicle
- (IV) A pedestrian

- Only (I) and (II) are correct
- Only (I) and (II) and (III) are correct
- Only (I) and (III) and (IV) are correct
- All four are correct

658. Which of the following is meant by "traffic"?

- (I) Includes all types of vehicles, other vehicles and traffic
- (II) Includes pedestrians and processions
- (III) Includes animals riding or in groups
- (IV) Includes all types of traffic using any road for the purpose of travel

- Only (I) and (II) are correct
- Only (I) and (II) and (III) are correct
- Only (I) and (II) and (IV) are correct
- All four are correct



653. The speed of a motorcycle with a four-year-old child riding on the back should not exceed

- 20 km/h
- 30 km/h
- 40 km/h
- 50 km/h

654. What safety precautions should a motorcycle driver take when riding with a child between the ages of 9 months and four years?

- Safety harness
- Crash helmet
- Not to exceed 40 kmph
- All of the above

655. A motor vehicle specially designed, constructed or modified under sub-section (2) of section 52 for the use of a person with any physical disability is called.....

- Invalid carriage
- Handicapped vehicle
- Adapted vehicle
- Altered vehicle

656. Gross vehicle weight of the vehicle is..... vehicle above is called a heavy vehicle, or a heavy goods vehicle, or a heavy passenger motor vehicle

- Rs 5000,000
- kg 12,000
- kg 5,000
- kg

657. "Road user" means who among the following?

- (I) A person driving a vehicle
- (II) A person travelling on a road in a vehicle
- (III) A person travelling on a road other than in a vehicle
- (IV) A pedestrian

- Only (I) and (II) are correct
- Only (I) and (II) and (III) are correct
- Only (I) and (III) and (IV) are correct
- All four are correct

658. Which of the following is meant by "traffic"?

- (I) Includes all types of vehicles, other vehicles and traffic
- (II) Includes pedestrians and processions
- (III) Includes animals riding or in groups
- (IV) Includes all types of traffic using any road for the purpose of travel

- Only (I) and (II) are correct
- Only (I) and (II) and (III) are correct
- Only (I) and (II) and (IV) are correct
- All four are correct



(I), (III) and (II) only are correct
All four are correct

664. Which of the following is the duty of a driver?

- (I) Keep a good lookout and keep his attention on the road and traffic and avoid any activity that may distract or distract him
 - (II) Take precautions for the safety of the most vulnerable road users such as pedestrians, cyclists, children, the elderly and the disabled
 - (III) Ensure that his vehicle does not cause any obstruction or unnecessary inconvenience to other road users or occupants of any property when moving or stationary
 - (IV) Ensure that his vision and hearing are not obstructed by passengers, animals, sometimes other equipment in the vehicle or the condition of the vehicle
- Only I) is correct
Only (II) is correct
Only (I) and (II) and (III) are correct
All four are correct

665. Select the most appropriate statement regarding the duties of a driver

- Viewing digital motion pictures, videos and route navigation while driving is not allowed
- Driving except where route navigation is required You can't watch digital motion pictures and videos while driving
- It's okay to watch digital motion pictures or videos while driving on the highway
- It's okay to watch digital motion pictures or videos while driving an electric vehicle

666. What should you do if you are driving a car with passengers and the brake warning light comes on and you feel that the brake pedal is low and the efficiency is decreasing?

- The vehicle should be taken to the service centre immediately
- Move the vehicle off the road as quickly as possible
- Do not stop the vehicle on the road for a moment
- Reduce the pain of the vehicle and proceed with caution

667. If a road is divided into several lanes for smooth traffic, which of the following statements is correct

- A driver is allowed to change lanes on the road only after giving the signal using the correct hand signal or indicator.
 - If any line on the road is specially marked for a category of vehicles, only that category of vehicle is allowed to drive on that line
 - If a lane is marked for a specific purpose, no other vehicle is allowed to drive on that lane
 - A continuous yellow line cannot be crossed, but a continuous white line can be crossed
- Only (I) is correct
Only (I) and (II) are correct
Only (I) and (II) are correct
All four are correct



653. The speed of a motorcycle with a four-year-old child riding on the back should not exceed

- 20 km/h
- 30 km/h
- 40 km/h
- 50 km/h

654. What safety precautions should a motorcycle driver take when riding with a child between the ages of 9 months and four years?

- Safety harness
- Crash helmet
- Not to exceed 40 kmph
- All of the above

655. A motor vehicle specially designed, constructed or modified under sub-section (2) of section 52 for the use of a person with any physical disability is called.....

- Invalid carriage
- Handicapped vehicle
- Adapted vehicle
- Altered vehicle

656. Gross vehicle weight of the vehicle is..... vehicle above is called a heavy vehicle, or a heavy goods vehicle, or a heavy passenger motor vehicle

- Rs 5000,000
- kg 12,000
- kg 5,000
- kg

657. "Road user" means who among the following?

- (I) A person driving a vehicle
- (II) A person travelling on a road in a vehicle
- (III) A person travelling on a road other than in a vehicle
- (IV) A pedestrian

- Only (I) and (II) are correct
- Only (I) and (II) and (III) are correct
- Only (I) and (III) and (IV) are correct
- All four are correct

658. Which of the following is meant by "traffic"?

- (I) Includes all types of vehicles, other vehicles and traffic
- (II) Includes pedestrians and processions
- (III) Includes animals riding or in groups
- (IV) Includes all types of traffic using any road for the purpose of travel

- Only (I) and (II) are correct
- Only (I) and (II) and (III) are correct
- Only (I) and (II) and (IV) are correct
- All four are correct



668. Which car has priority at the junction of equal importance roads shown in the figure without a signal or police control?

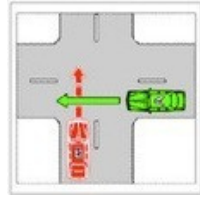
At the junctions, the vehicle coming from the left side has priority i.e. B

(red car) has priority

At the junctions, the vehicle coming from the right side has priority i.e. A (green car) has priority

Since the roads are of equal importance, both have equal rights

Neither car has priority



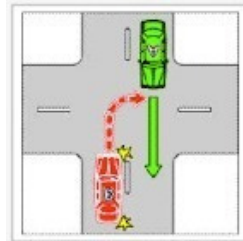
669. At the junction of equal importance roads without a signal or police control shown in the figure Which car has priority at the junction of roads?

Vehicle B (red) has priority because it is about to turn

Since the roads are of equal importance, both have equal right of way, so proceed with caution

Vehicle A (green) has entered the intersection and is going straight ahead, so vehicle A has priority over vehicle B

Both vehicles should stop and proceed with caution




670. Which car has priority at a roundabout?

Car A has priority because it is going straight ahead

Car B has priority because it has already entered the roundabout

Both cars have equal importance

None of the above is correct



671. At a junction with a traffic control signal

(I) The vehicle must slow down and obey the instructions given by the traffic control signals.

(II) At an intersection with a red light, the vehicle must stop before the stop line before the pedestrian crossing

(III) If the stop line is not marked or if the marking is not visible, the vehicle must stop before the pedestrian crossing

(IV) If the pedestrian crossing is not marked, the vehicle must stop before the second (secondary) traffic signal

(I) only is correct

(I) and (II) only are correct

(I) and (II) and (III) only are correct

All four are correct c

672. Which of the following statements is correct in the case of overtaking?

(I) Overtaking is only allowed on the right side of a vehicle

(II) In multi-lane traffic, it is legal to overtake with caution in the left lane if the vehicles are moving in the same direction

(III) In the case where the vehicle to be overtaken is moving in the middle of the road and is signalling to either turn right or make a "U" turn, it is safe to overtake that vehicle on the left side

(IV) The vehicle to be overtaken is stationary and it is safe to pass from the left side

(I) is correct only (I) and (

II) are correct only (I), (II

)and (III) are correct All

four are correct



673. Mr. A, who was supposed to turn onto the left side road, noticed that he had passed the road he was supposed to turn on when his car had gone about 50 meters. In this situation, which of the following should Mr. A do?

Reverse the vehicle until it reaches the side road it has passed

No motor vehicle is allowed to reverse onto a public road in reverse direction, so it is not allowed to reverse

In rural areas, he is not allowed to reverse the vehicle because reversing is restricted only in the city or municipality

He can reverse the vehicle during the day on multi-lane roads and highways

674. Which statement regarding parking is incorrect?

No vehicle shall be parked in a place where parking is prohibited

No vehicle shall be parked on a road or part of a road where the maximum speed limit is 50 km/h

No vehicle shall be parked 100 meters before or after an intersection or junction

No vehicle shall be parked on a footpath, cycle track or pedestrian crossing

675. Which statement regarding parking is incorrect

No vehicle shall be parked in the opposite direction of another parked vehicle

No vehicle shall be parked on a continuous yellow line painted on the curb of the road

No vehicle may be parked in any place where "No Parking" is not posted

No vehicle shall be parked on a footpath